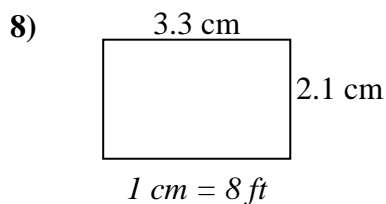
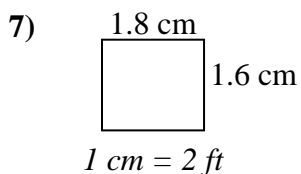
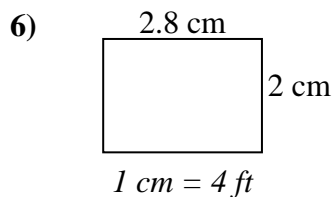
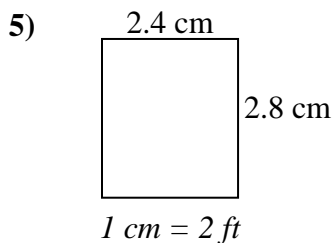
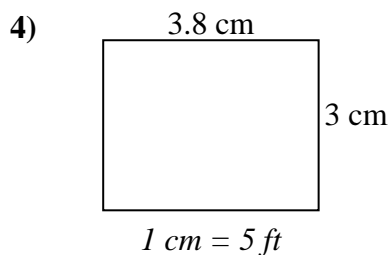
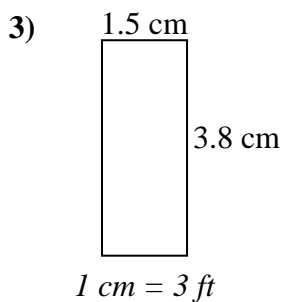
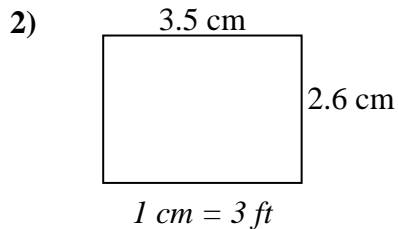
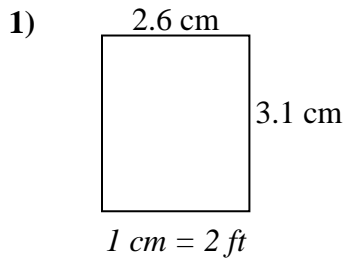




Determine the actual width, height and area of each scale rectangle.

Round the area to the nearest whole number.



### Answers

1. \_\_\_\_\_

2. \_\_\_\_\_

3. \_\_\_\_\_

4. \_\_\_\_\_

5. \_\_\_\_\_

6. \_\_\_\_\_

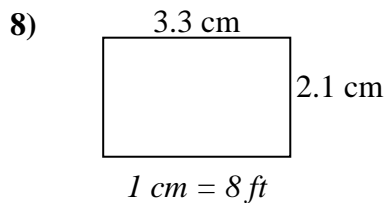
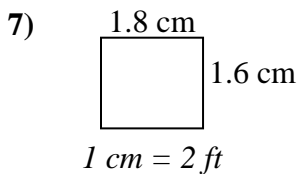
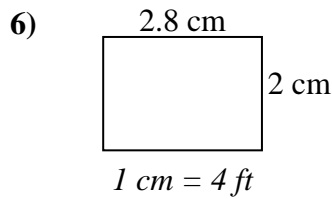
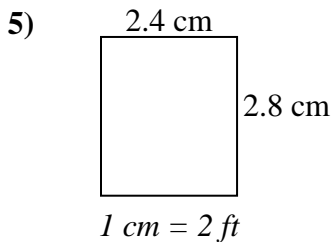
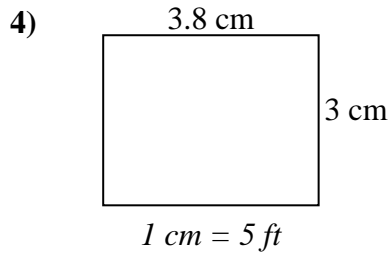
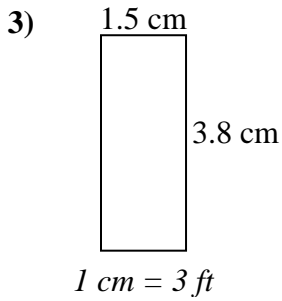
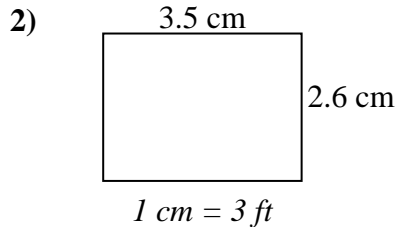
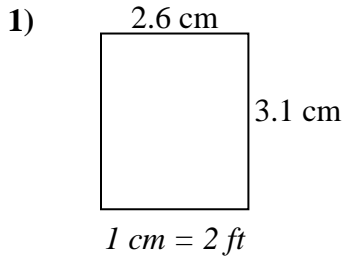
7. \_\_\_\_\_

8. \_\_\_\_\_



Determine the actual width, height and area of each scale rectangle.

Round the area to the nearest whole number.



Answers

1.	<u>5.2</u>	<u>6.2</u>	<u>32</u>
2.	<u>10.5</u>	<u>7.8</u>	<u>82</u>
3.	<u>4.5</u>	<u>11.4</u>	<u>51</u>
4.	<u>19</u>	<u>15</u>	<u>285</u>
5.	<u>4.8</u>	<u>5.6</u>	<u>27</u>
6.	<u>11.2</u>	<u>8</u>	<u>90</u>
7.	<u>3.6</u>	<u>3.2</u>	<u>12</u>
8.	<u>26.4</u>	<u>16.8</u>	<u>444</u>