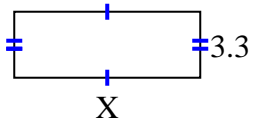


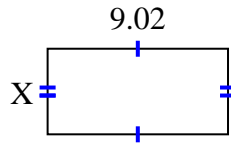


Find the value of X for each figure. Each figure is in centimeters (cm). Not to scale.

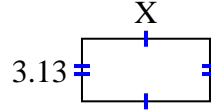
1) area = 30.69 cm^2



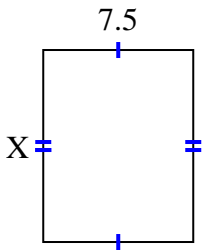
2) area = 38.6056 cm^2



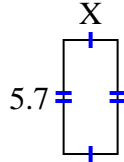
3) area = 20.032 cm^2



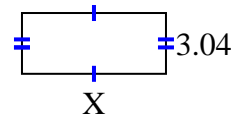
4) area = 72 cm^2



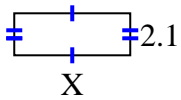
5) area = 15.39 cm^2



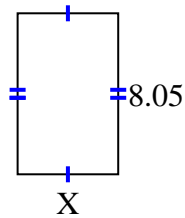
6) area = 21.888 cm^2



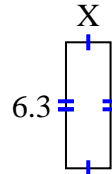
7) area = 12.18 cm^2



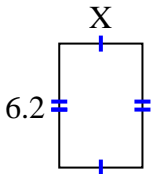
8) area = 40.4915 cm^2



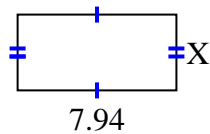
9) area = 14.049 cm^2



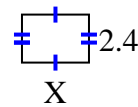
10) area = 25.792 cm^2



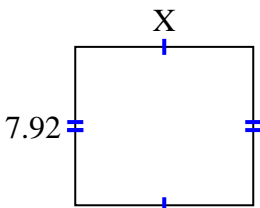
11) area = 30.0926 cm^2



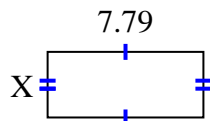
12) area = 8.04 cm^2



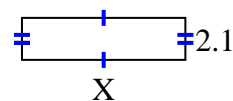
13) area = 70.488 cm^2



14) area = 25.5512 cm^2



15) area = 17.157 cm^2



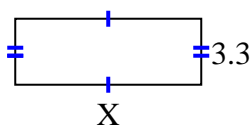
Answers

1. _____
2. _____
3. _____
4. _____
5. _____
6. _____
7. _____
8. _____
9. _____
10. _____
11. _____
12. _____
13. _____
14. _____
15. _____

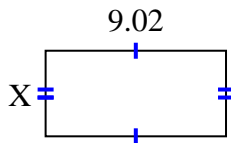


Find the value of X for each figure. Each figure is in centimeters (cm). Not to scale.

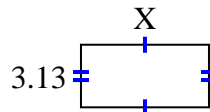
1) area = 30.69 cm^2



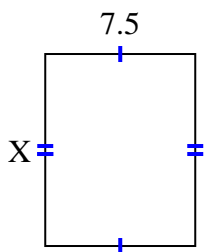
2) area = 38.6056 cm^2



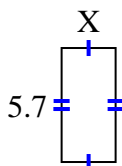
3) area = 20.032 cm^2



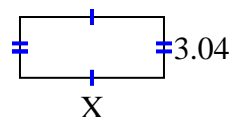
4) area = 72 cm^2



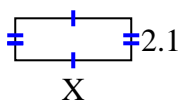
5) area = 15.39 cm^2



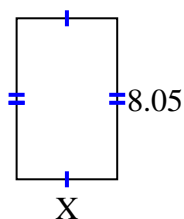
6) area = 21.888 cm^2



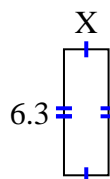
7) area = 12.18 cm^2



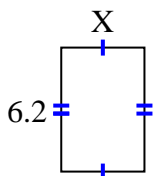
8) area = 40.4915 cm^2



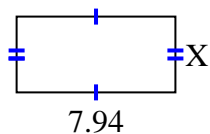
9) area = 14.049 cm^2



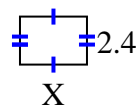
10) area = 25.792 cm^2



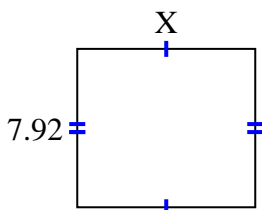
11) area = 30.0926 cm^2



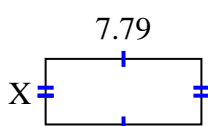
12) area = 8.04 cm^2



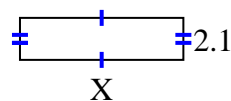
13) area = 70.488 cm^2



14) area = 25.5512 cm^2



15) area = 17.157 cm^2



Answers

1. 9.3

2. 4.28

3. 6.4

4. 9.6

5. 2.7

6. 7.2

7. 5.8

8. 5.03

9. 2.23

10. 4.16

11. 3.79

12. 3.35

13. 8.9

14. 3.28

15. 8.17