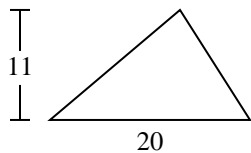




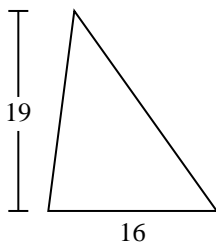
Find the area of the triangle. Round your answer to the nearest 10th.

Answers

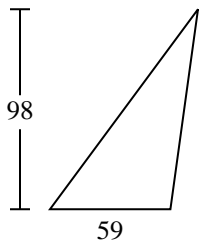
1)



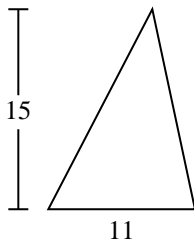
2)



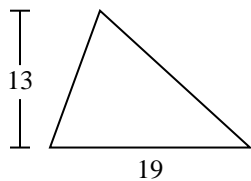
3)



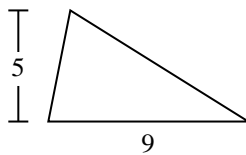
4)



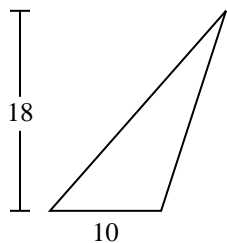
5)



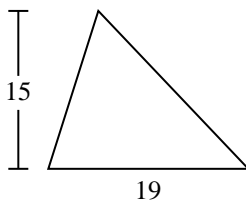
6)



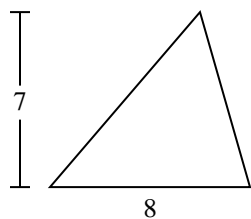
7)



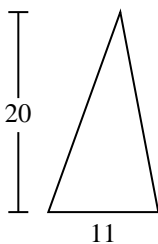
8)



9)



10)

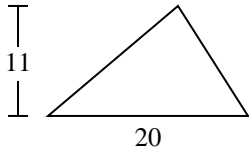


- 1. _____
- 2. _____
- 3. _____
- 4. _____
- 5. _____
- 6. _____
- 7. _____
- 8. _____
- 9. _____
- 10. _____

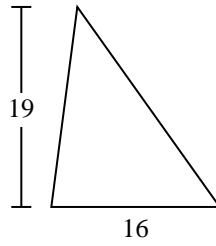


Find the area of the triangle. Round your answer to the nearest 10th.

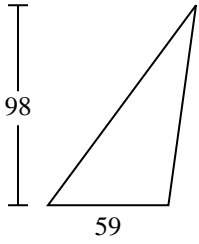
1)



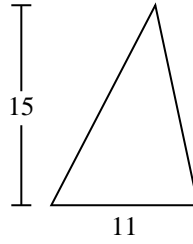
2)



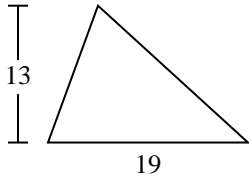
3)



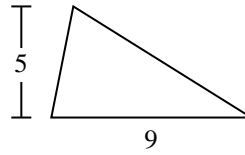
4)



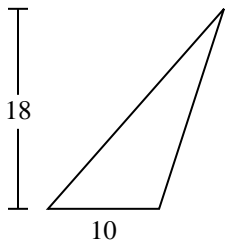
5)



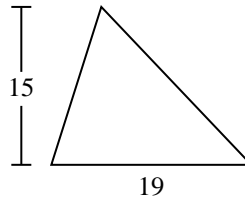
6)



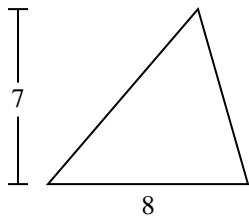
7)



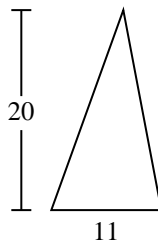
8)



9)



10)



Answers

1. 110

2. 152

3. 2,891

4. 82.5

5. 123.5

6. 22.5

7. 90

8. 142.5

9. 28

10. 110



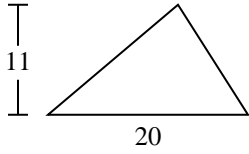
Find the area of the triangle. Round your answer to the nearest 10th.

22.5	152	28	90	142.5
123.5	2,891	82.5	110	

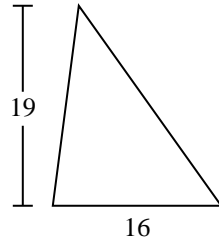
Answers

1. _____
2. _____
3. _____
4. _____
5. _____
6. _____
7. _____
8. _____
9. _____

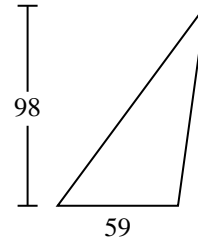
1)



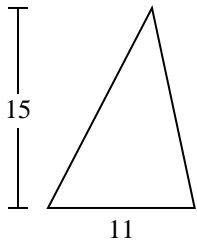
2)



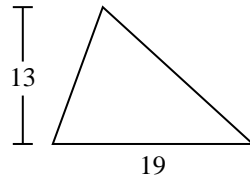
3)



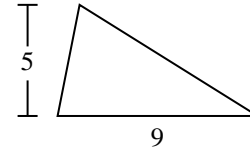
4)



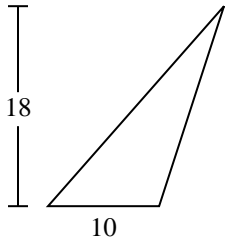
5)



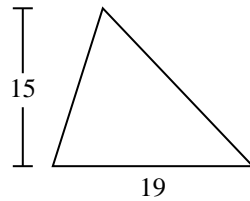
6)



7)



8)



9)

