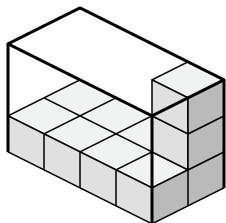


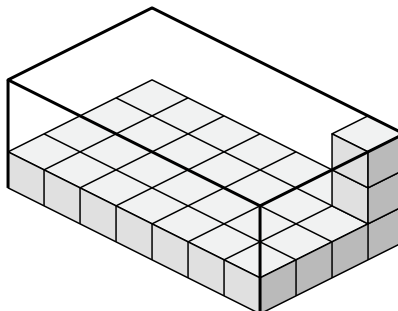


Determine the volume of each box. Each block is 1 cubic unit ( $u^3$ ).

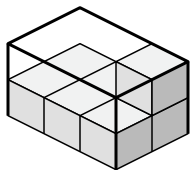
1)



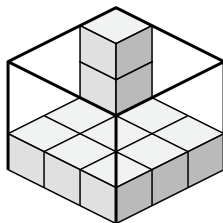
2)



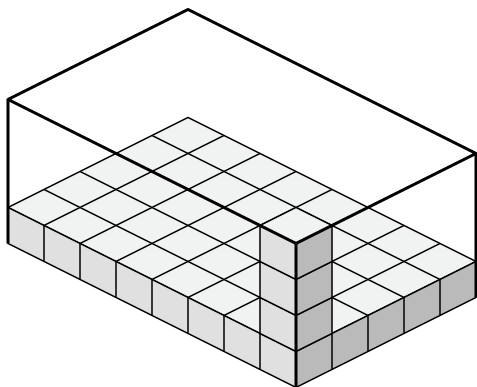
3)



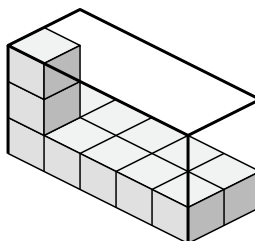
4)



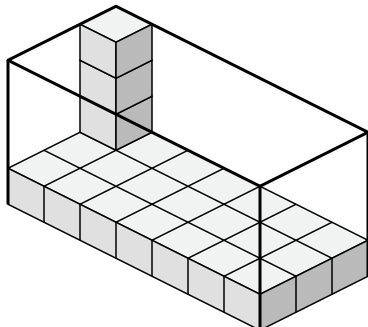
5)



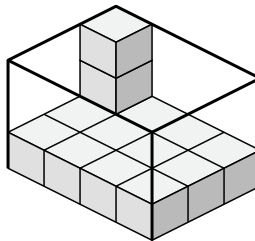
6)



7)



8)



Answers

1. \_\_\_\_\_

2. \_\_\_\_\_

3. \_\_\_\_\_

4. \_\_\_\_\_

5. \_\_\_\_\_

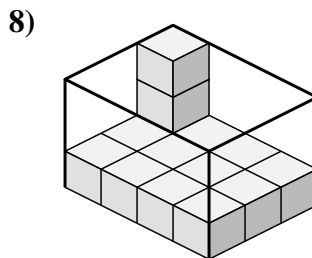
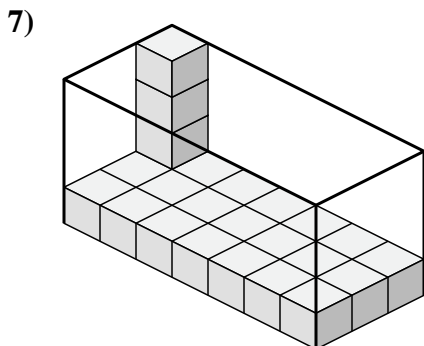
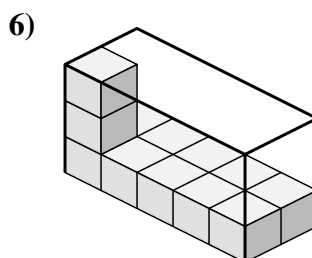
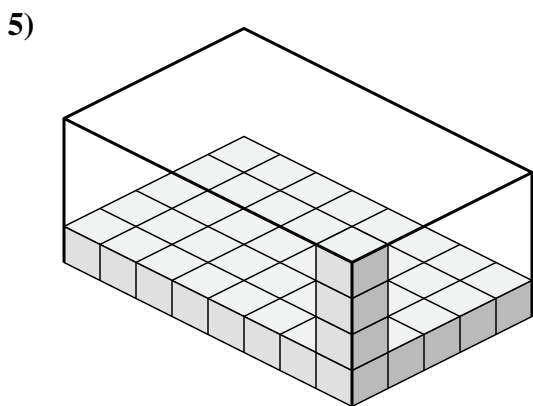
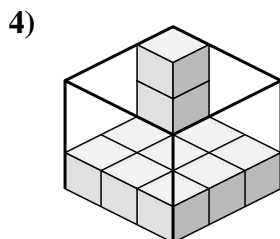
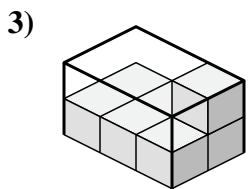
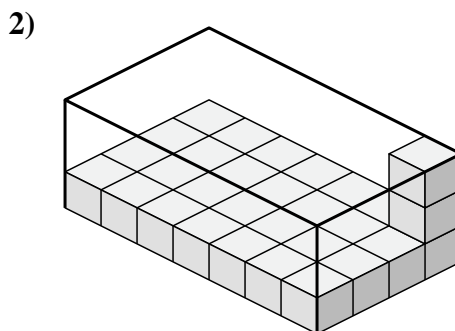
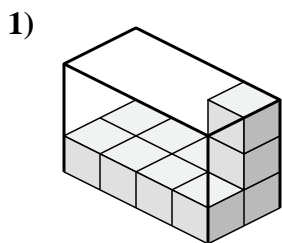
6. \_\_\_\_\_

7. \_\_\_\_\_

8. \_\_\_\_\_



Determine the volume of each box. Each block is 1 cubic unit ( $u^3$ ).



Answers

1. 24  $u^3$

2. 84  $u^3$

3. 12  $u^3$

4. 27  $u^3$

5. 160  $u^3$

6. 30  $u^3$

7. 84  $u^3$

8. 36  $u^3$