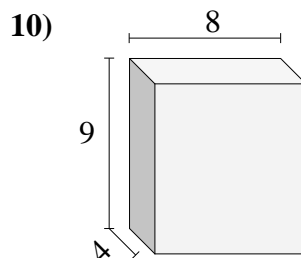
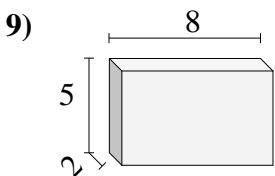
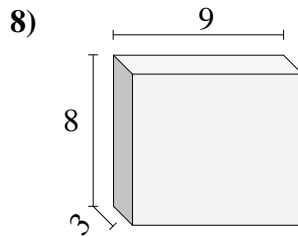
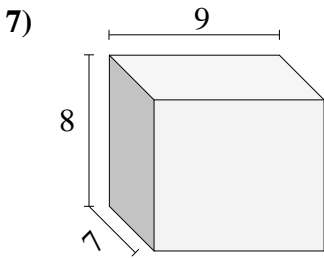
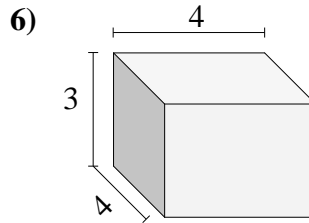
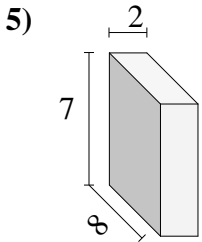
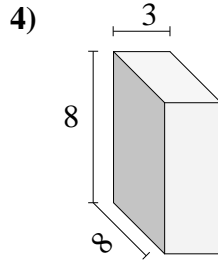
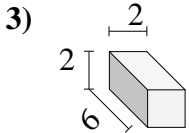
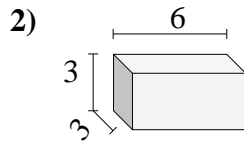
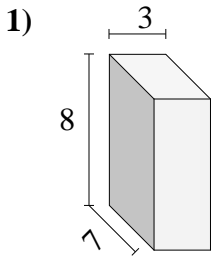




Find the volume of each of the rectangular prisms. Measured in cm (not to scale).

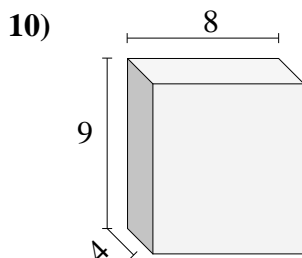
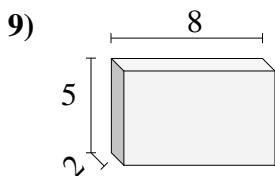
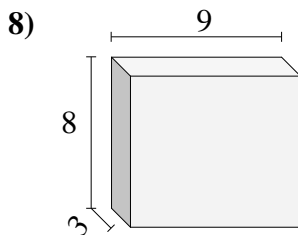
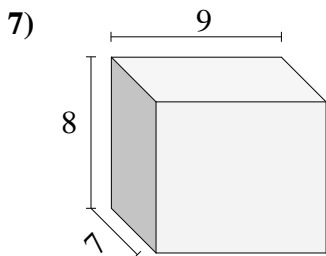
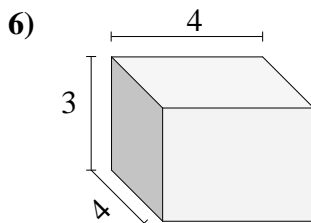
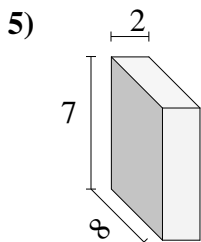
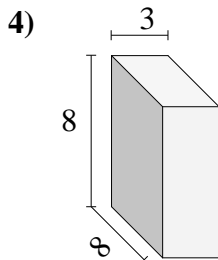
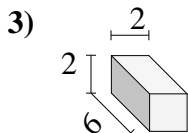
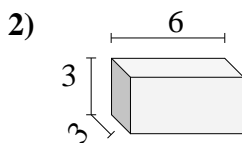
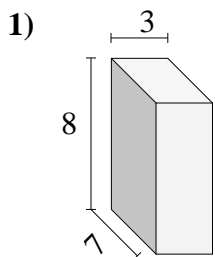


Answers

- 1. _____
- 2. _____
- 3. _____
- 4. _____
- 5. _____
- 6. _____
- 7. _____
- 8. _____
- 9. _____
- 10. _____



Find the volume of each of the rectangular prisms. Measured in cm (not to scale).



Answers

1. 168

2. 54

3. 24

4. 192

5. 112

6. 48

7. 504

8. 216

9. 80

10. 288