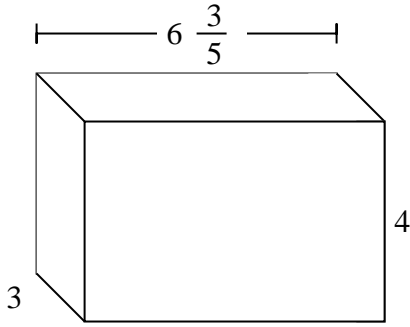


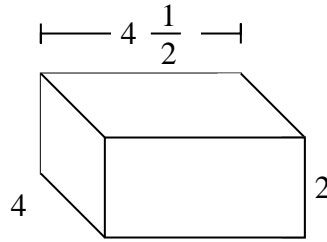


Fill each rectangular prism with cubes to determine the volume. Each prism's unit is measured in cm (not to scale).

Ex)



1)

AnswersEx.  $79\frac{1}{5}$  cm

1. \_\_\_\_\_

2. \_\_\_\_\_

3. \_\_\_\_\_

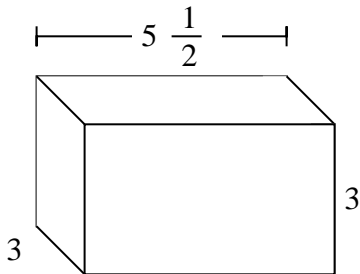
4. \_\_\_\_\_

5. \_\_\_\_\_

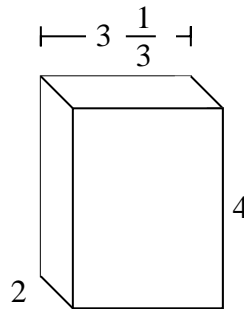
6. \_\_\_\_\_

7. \_\_\_\_\_

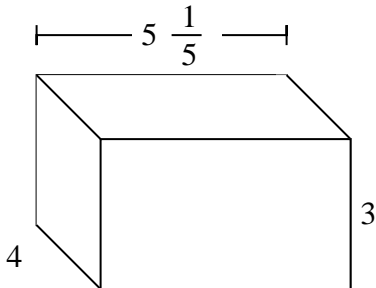
2)



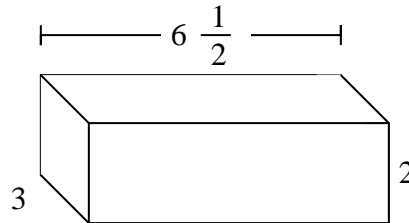
3)



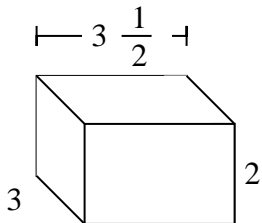
4)



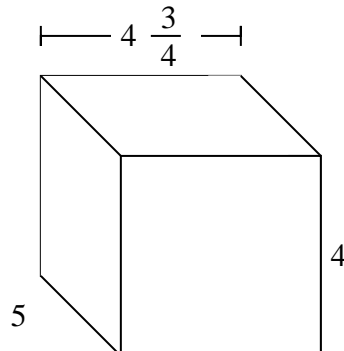
5)



6)

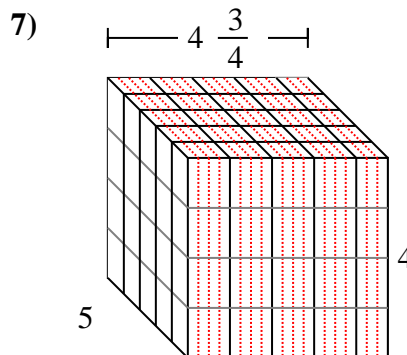
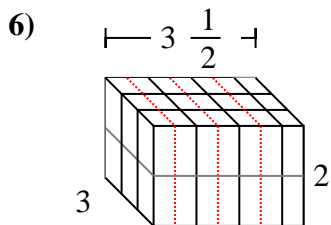
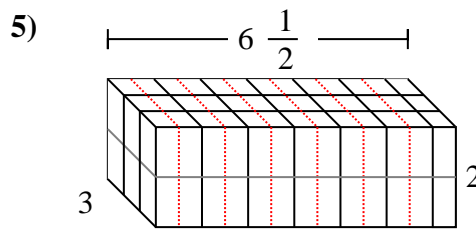
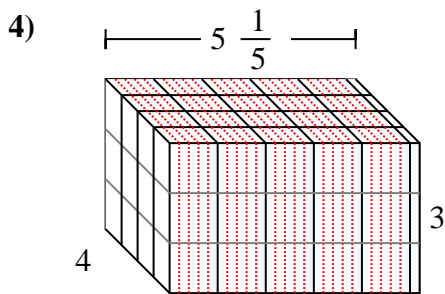
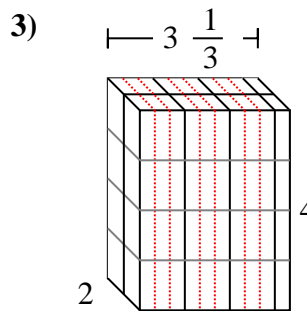
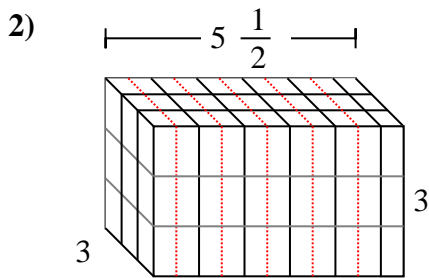
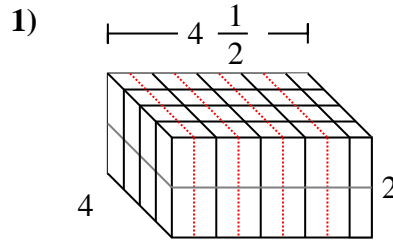
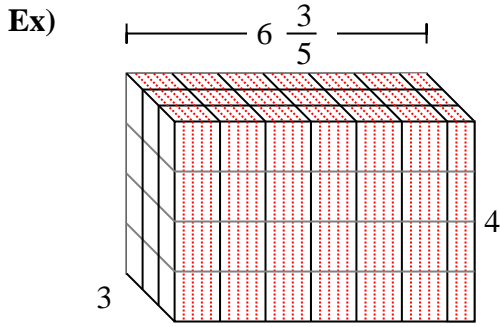


7)





Fill each rectangular prism with cubes to determine the volume. Each prism's unit is measured in cm (not to scale).

**Answers**Ex. 79  $\frac{1}{5}$  cm1. 36 cm2. 49  $\frac{1}{2}$  cm3. 26  $\frac{2}{3}$  cm4. 62  $\frac{2}{5}$  cm5. 39 cm6. 21 cm7. 95 cm