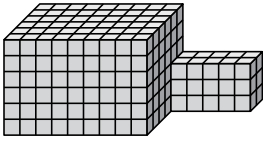




Find the total volume of each figure. Measurement is in cm (not to scale).

Answers

1)



1. \_\_\_\_\_

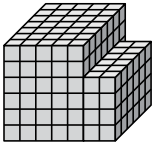
2. \_\_\_\_\_

3. \_\_\_\_\_

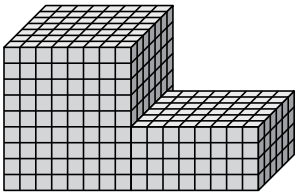
4. \_\_\_\_\_

5. \_\_\_\_\_

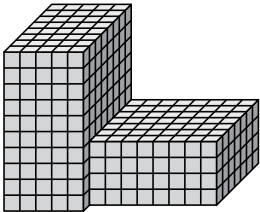
2)



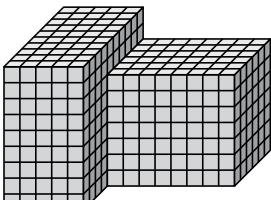
3)



4)

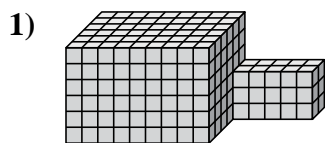


5)

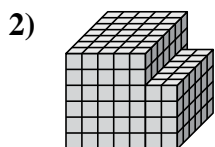




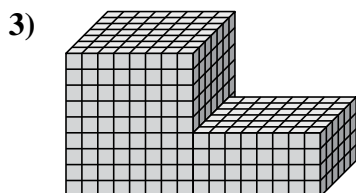
Find the total volume of each figure. Measurement is in cm (not to scale).



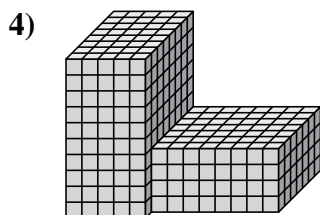
$$9 \times 6 \times 6 = 324$$
$$5 \times 2 \times 3 = 30$$



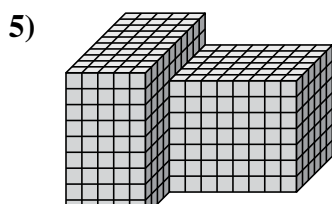
$$5 \times 7 \times 6 = 210$$
$$2 \times 6 \times 4 = 48$$



$$8 \times 7 \times 9 = 504$$
$$8 \times 6 \times 4 = 192$$



$$5 \times 8 \times 10 = 400$$
$$8 \times 7 \times 4 = 224$$



$$5 \times 10 \times 9 = 450$$
$$8 \times 6 \times 7 = 336$$

**Answers**

1. 354 cm<sup>3</sup>

2. 258 cm<sup>3</sup>

3. 696 cm<sup>3</sup>

4. 624 cm<sup>3</sup>

5. 786 cm<sup>3</sup>