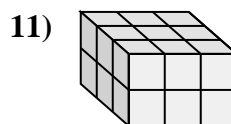
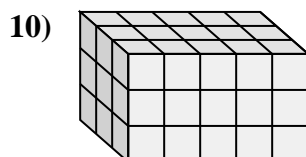
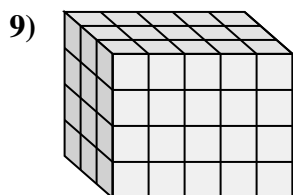
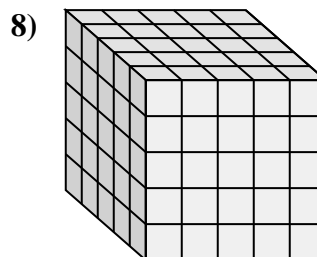
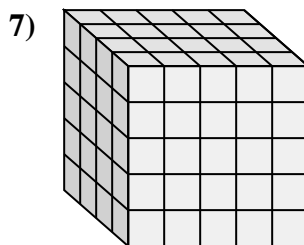
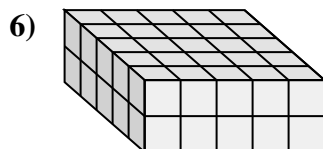
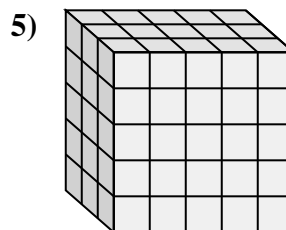
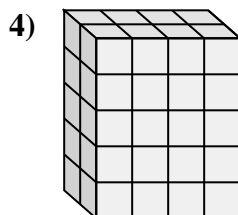
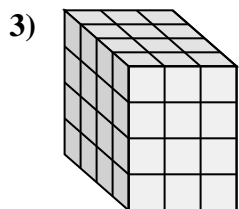
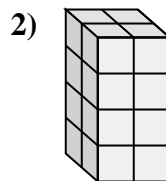
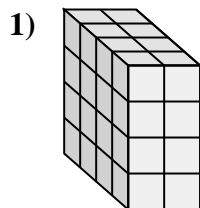
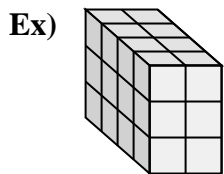




Match each problem with the equation that could represent it. Answer with the missing term and letter.



Answers

Ex. D, 4

1. I, 4

2. E, 2

3. K, 4

4. B, 2

5. J, 3

6. H, 50

7. G, 5

8. L, 5

9. A, 5

10. F, 5

11. C, 3

A. $3 \times \underline{\quad} \times 4 = 60$

B. $\underline{\quad} \times 4 \times 5 = 40$

C. $3 \times \underline{\quad} \times 2 = 18$

D. $\underline{\quad} \times 2 \times 3 = 24$

E. $\underline{\quad} \times 2 \times 4 = 16$

F. $3 \times \underline{\quad} \times 3 = 45$

G. $4 \times \underline{\quad} \times 5 = 100$

H. $5 \times 5 \times 2 = \underline{\quad}$

I. $4 \times 2 \times \underline{\quad} = 32$

J. $\underline{\quad} \times 5 \times 5 = 75$

K. $4 \times 3 \times \underline{\quad} = 48$

L. $5 \times 5 \times \underline{\quad} = 125$