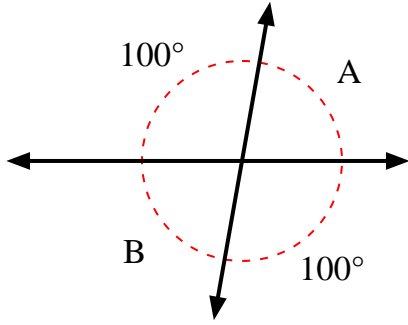


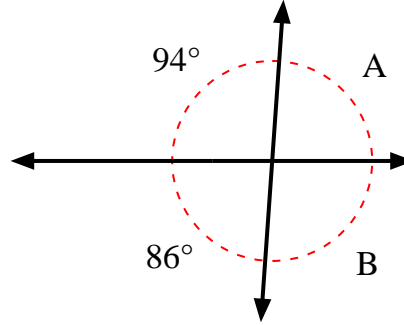


Find the value of angle 'A' and angle 'B'.

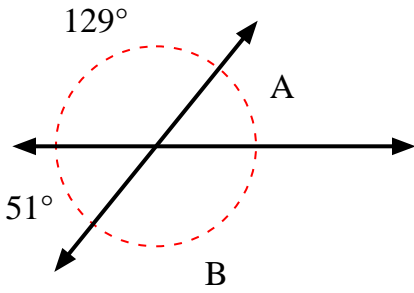
1)



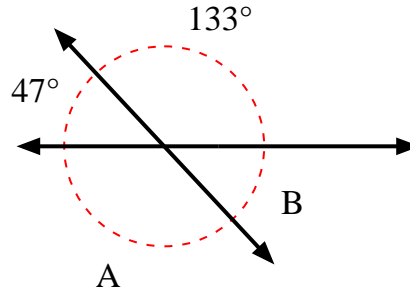
2)



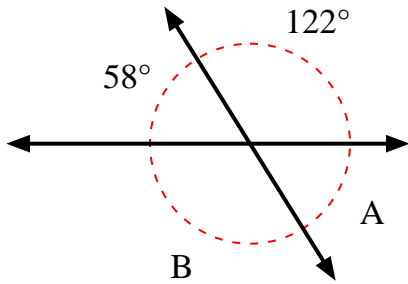
3)



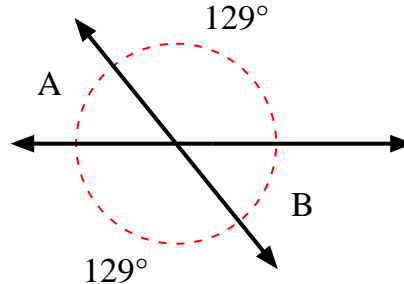
4)



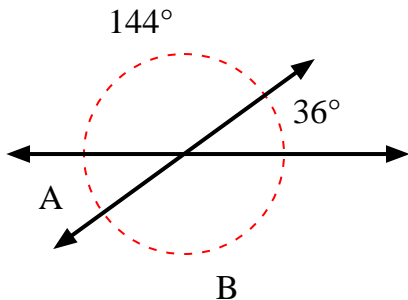
5)



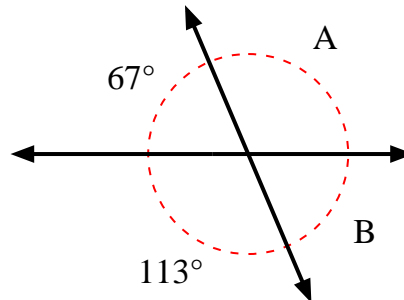
6)



7)



8)



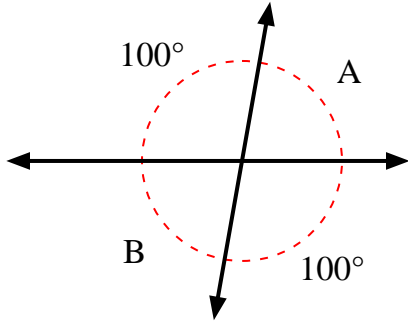
Answers

1. \_\_\_\_\_
2. \_\_\_\_\_
3. \_\_\_\_\_
4. \_\_\_\_\_
5. \_\_\_\_\_
6. \_\_\_\_\_
7. \_\_\_\_\_
8. \_\_\_\_\_

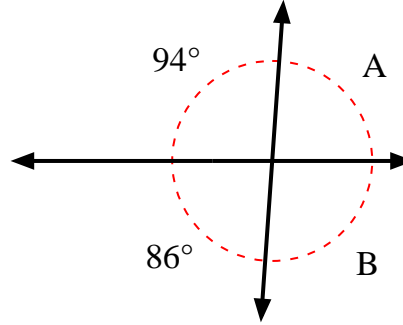


Find the value of angle 'A' and angle 'B'.

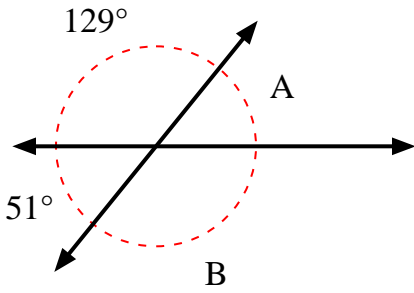
1)



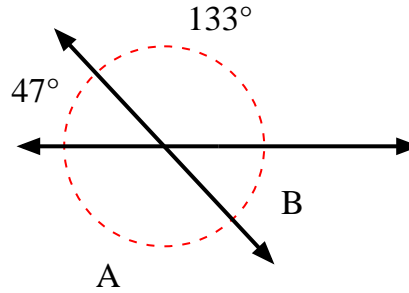
2)



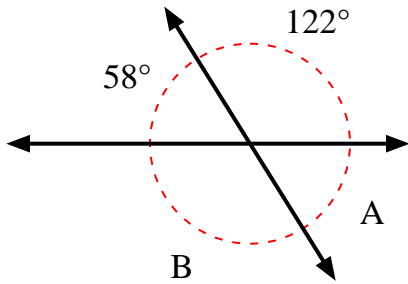
3)



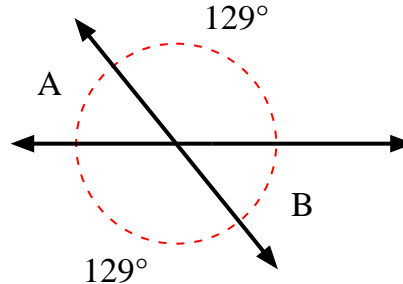
4)



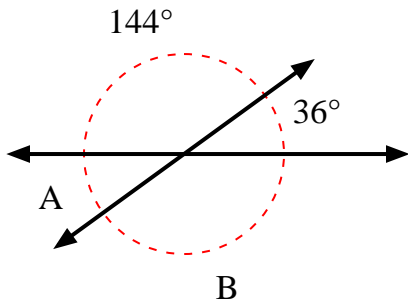
5)



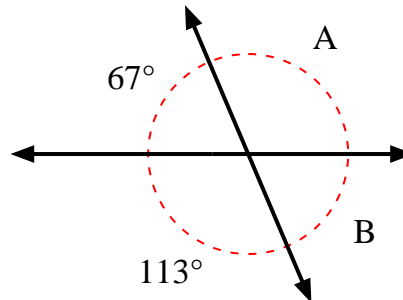
6)



7)



8)



Answers

1.	<u>80°</u>	<u>80°</u>
2.	<u>86°</u>	<u>94°</u>
3.	<u>51°</u>	<u>129°</u>
4.	<u>133°</u>	<u>47°</u>
5.	<u>58°</u>	<u>122°</u>
6.	<u>51°</u>	<u>51°</u>
7.	<u>36°</u>	<u>144°</u>
8.	<u>113°</u>	<u>67°</u>