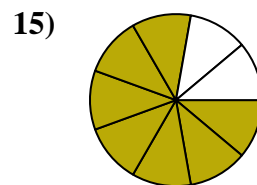
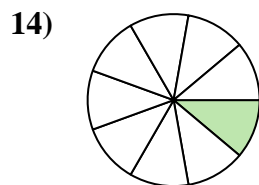
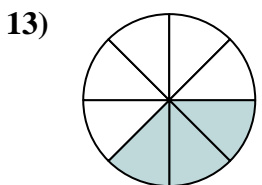
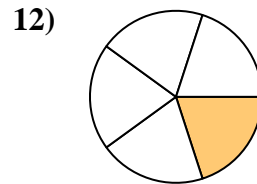
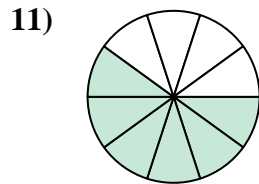
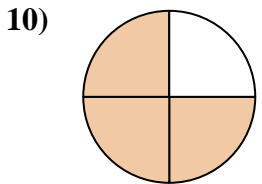
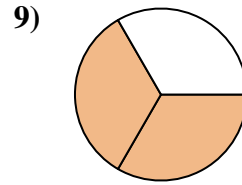
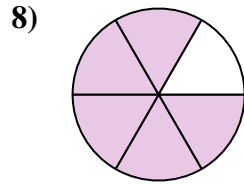
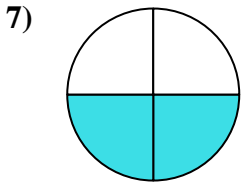
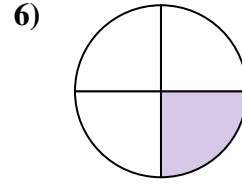
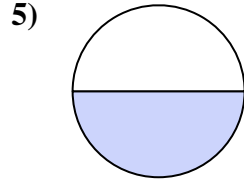
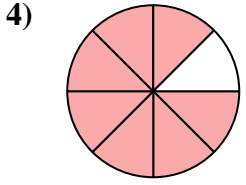
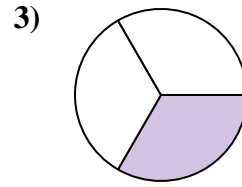
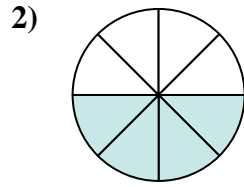
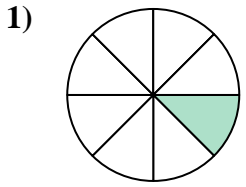




Find the angle (in degrees) of the shaded portion of the circle.

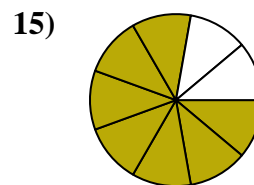
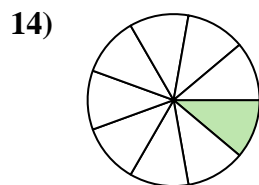
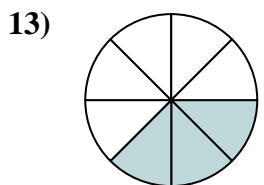
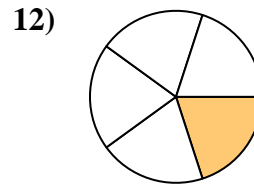
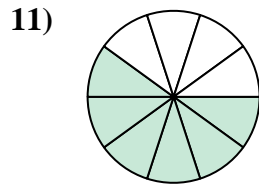
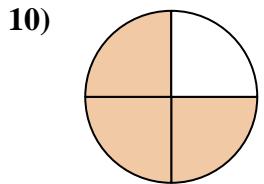
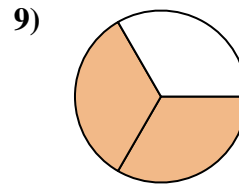
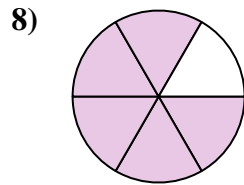
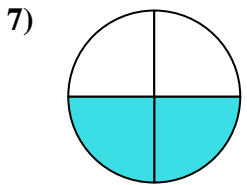
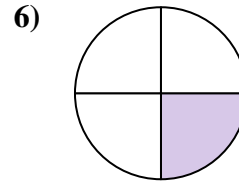
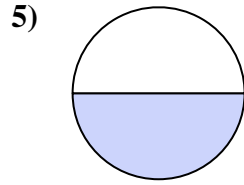
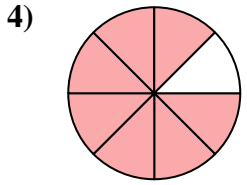
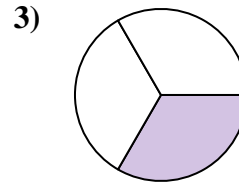
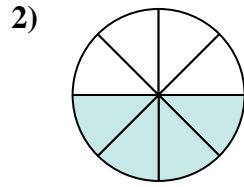
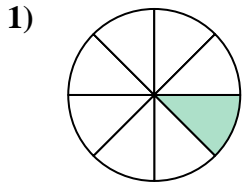
Answers



1. _____
2. _____
3. _____
4. _____
5. _____
6. _____
7. _____
8. _____
9. _____
10. _____
11. _____
12. _____
13. _____
14. _____
15. _____



Find the angle (in degrees) of the shaded portion of the circle.



Answers

1. 45

2. 180

3. 120

4. 315

5. 180

6. 90

7. 180

8. 300

9. 240

10. 270

11. 216

12. 72

13. 135

14. 40

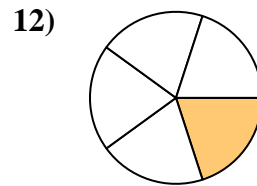
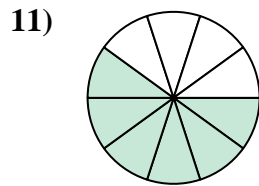
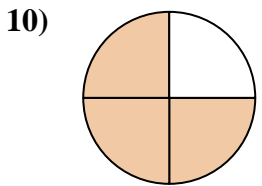
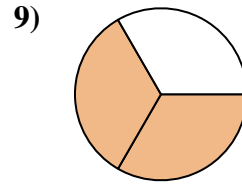
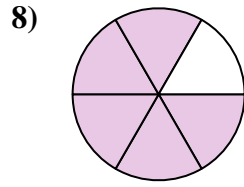
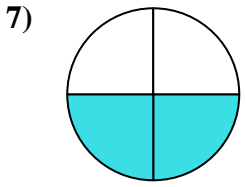
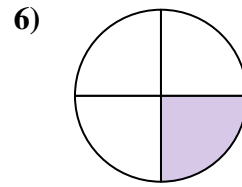
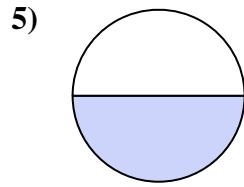
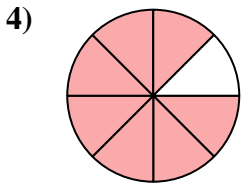
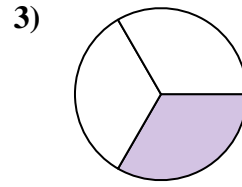
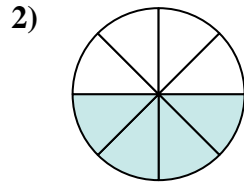
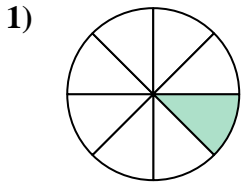
15. 280



Find the angle (in degrees) of the shaded portion of the circle.

Answers

90	216	45	180	180
300	240	270	120	315
180	72			



1. _____
2. _____
3. _____
4. _____
5. _____
6. _____
7. _____
8. _____
9. _____
10. _____
11. _____
12. _____