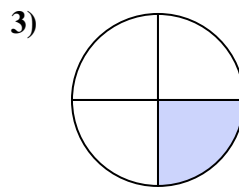
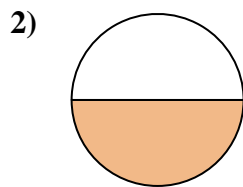
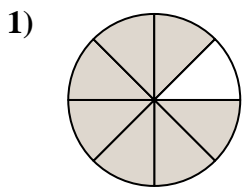


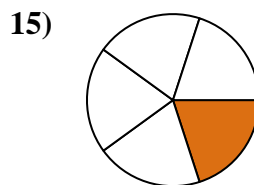
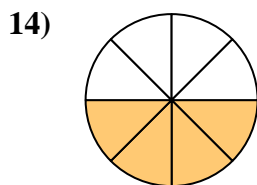
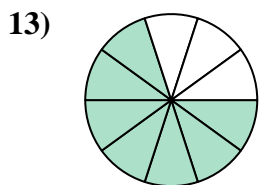
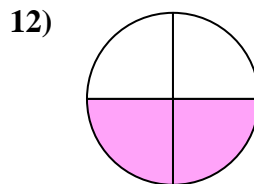
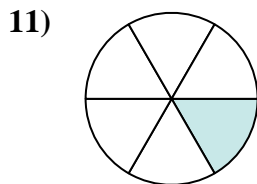
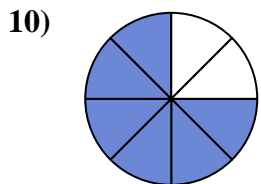
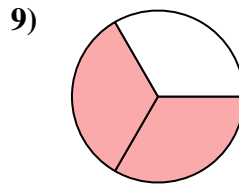
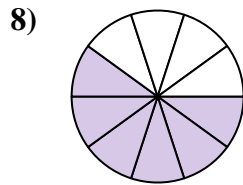
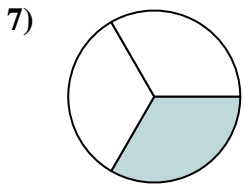
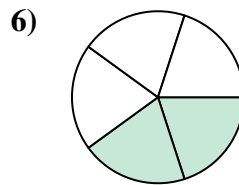
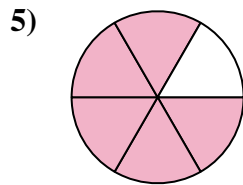
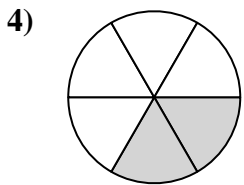


Find the angle (in degrees) of the shaded portion of the circle.

Answers

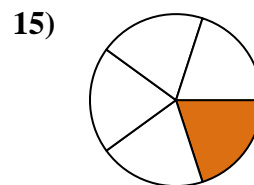
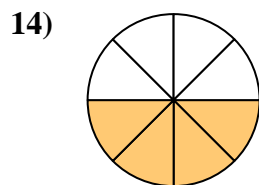
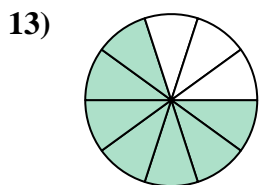
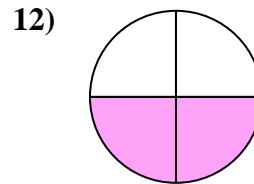
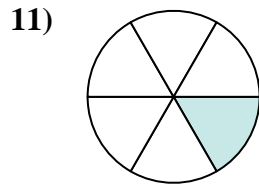
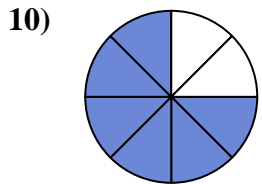
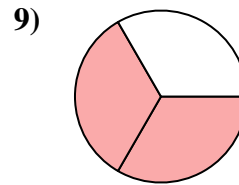
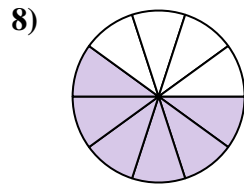
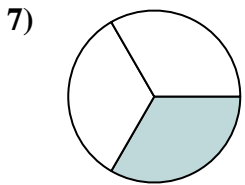
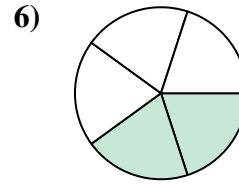
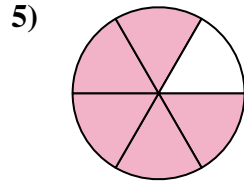
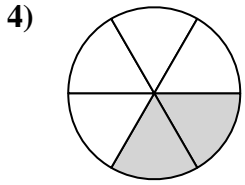
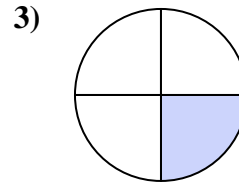
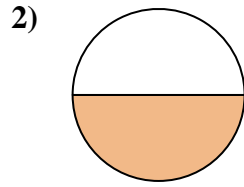
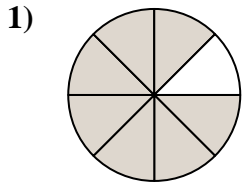


1. _____
2. _____
3. _____
4. _____
5. _____
6. _____
7. _____
8. _____
9. _____
10. _____
11. _____
12. _____
13. _____
14. _____
15. _____





Find the angle (in degrees) of the shaded portion of the circle.



Answers

1. 315

2. 180

3. 90

4. 120

5. 300

6. 144

7. 120

8. 216

9. 240

10. 270

11. 60

12. 180

13. 252

14. 180

15. 72



Find the angle (in degrees) of the shaded portion of the circle.

Answers

120

270

90

216

315

180

180

144

240

300

120

60

1. _____

2. _____

3. _____

4. _____

5. _____

6. _____

7. _____

8. _____

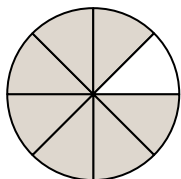
9. _____

10. _____

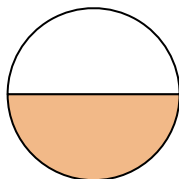
11. _____

12. _____

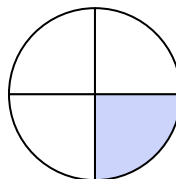
1)



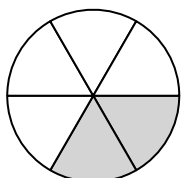
2)



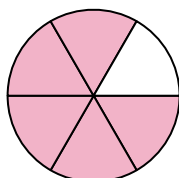
3)



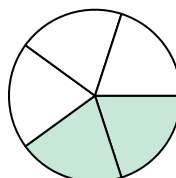
4)



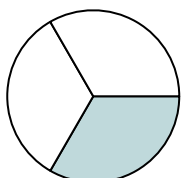
5)



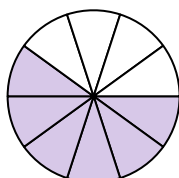
6)



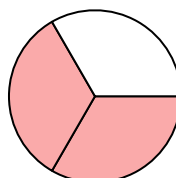
7)



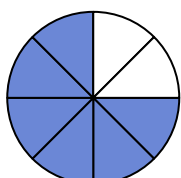
8)



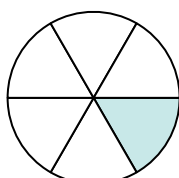
9)



10)



11)



12)

