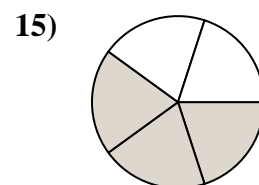
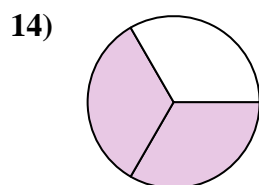
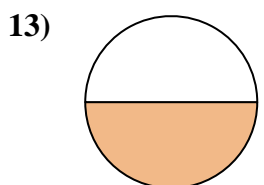
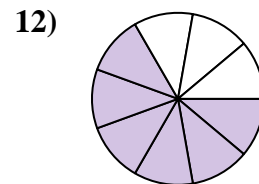
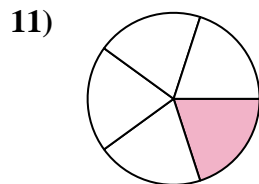
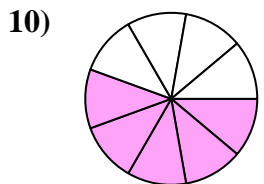
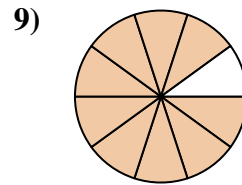
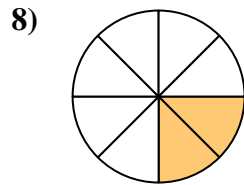
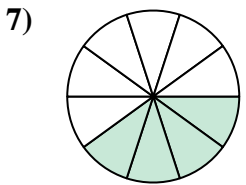
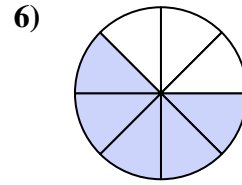
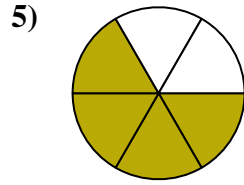
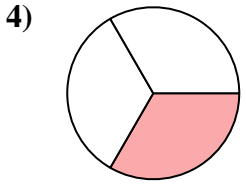
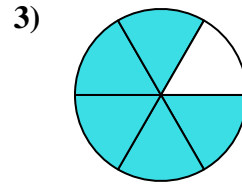
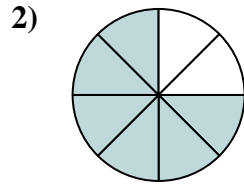
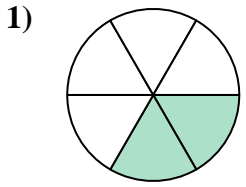




Find the angle (in degrees) of the shaded portion of the circle.

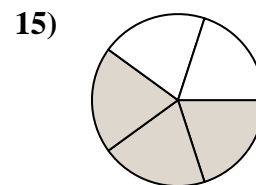
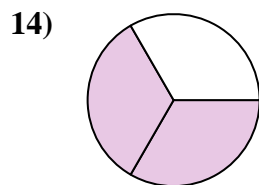
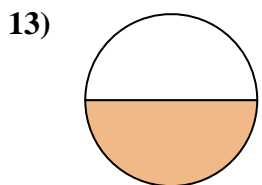
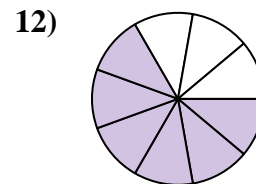
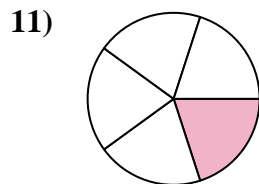
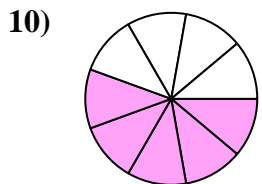
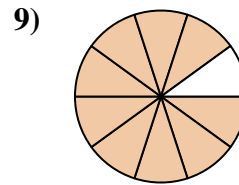
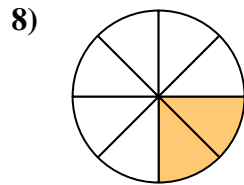
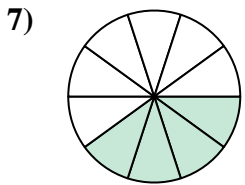
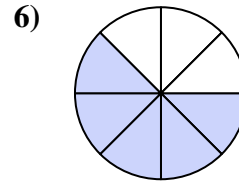
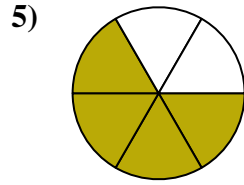
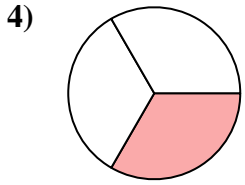
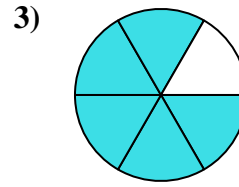
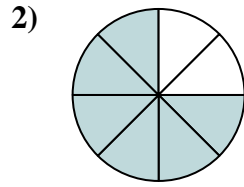
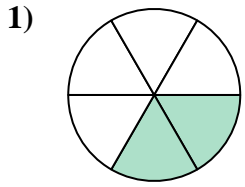
Answers



1. _____
2. _____
3. _____
4. _____
5. _____
6. _____
7. _____
8. _____
9. _____
10. _____
11. _____
12. _____
13. _____
14. _____
15. _____



Find the angle (in degrees) of the shaded portion of the circle.



Answers

1. 120

2. 270

3. 300

4. 120

5. 240

6. 225

7. 144

8. 90

9. 324

10. 200

11. 72

12. 240

13. 180

14. 240

15. 216



Find the angle (in degrees) of the shaded portion of the circle.

Answers

144

120

120

270

200

240

240

90

72

225

324

300

1. _____

2. _____

3. _____

4. _____

5. _____

6. _____

7. _____

8. _____

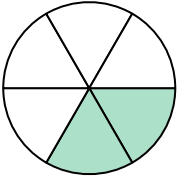
9. _____

10. _____

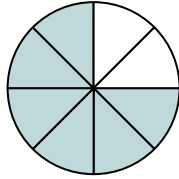
11. _____

12. _____

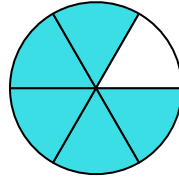
1)



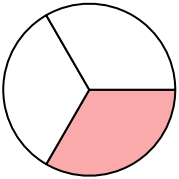
2)



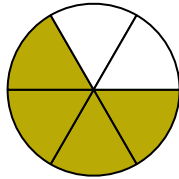
3)



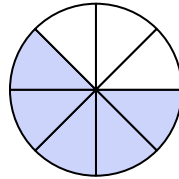
4)



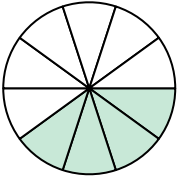
5)



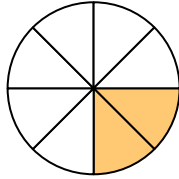
6)



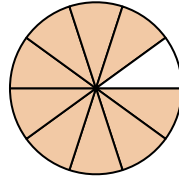
7)



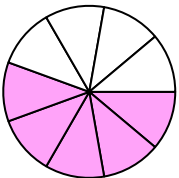
8)



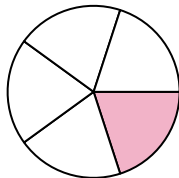
9)



10)



11)



12)

