

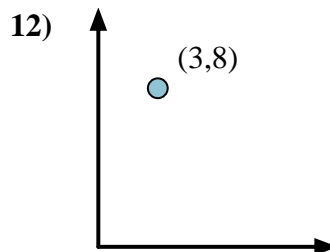
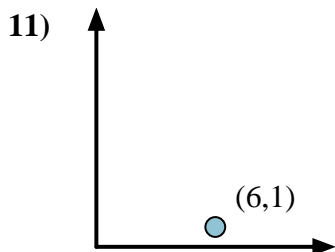
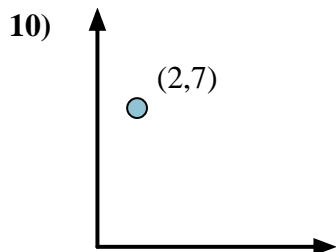
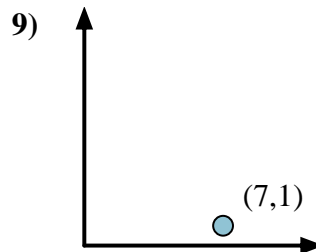
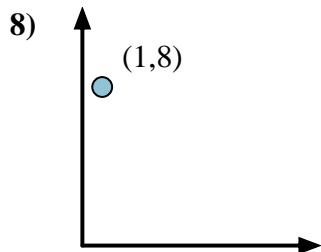
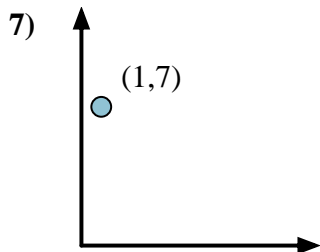
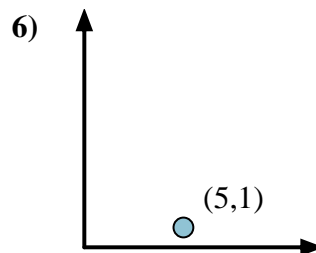
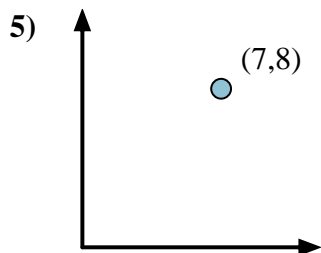
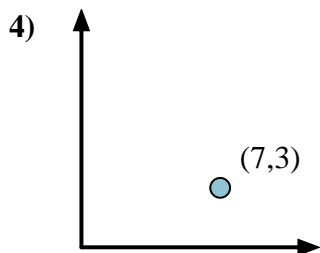
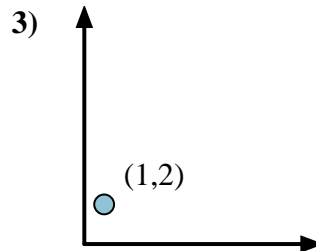
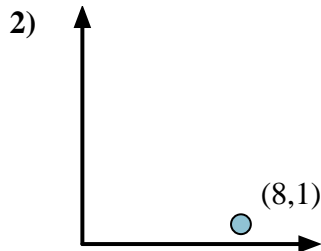
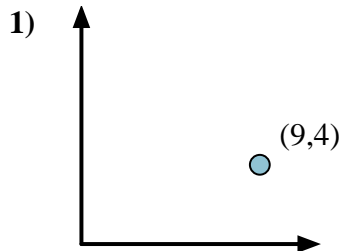


Calculate the angle of the circle relative to (0,0).

First find the slope.  
 $(y_2 - y_1) \div (x_2 - x_1) = m$   
 $(5 - 0) \div (4 - 0) = 1.25$

Then find the arc tangent (aka. inverse tangent) of the slope.  
 $\arctan(1.25) = 51.34^\circ$

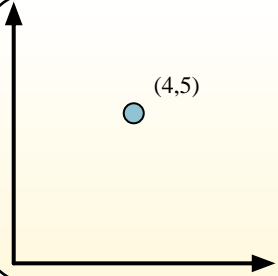
Answers



1. \_\_\_\_\_
2. \_\_\_\_\_
3. \_\_\_\_\_
4. \_\_\_\_\_
5. \_\_\_\_\_
6. \_\_\_\_\_
7. \_\_\_\_\_
8. \_\_\_\_\_
9. \_\_\_\_\_
10. \_\_\_\_\_
11. \_\_\_\_\_
12. \_\_\_\_\_

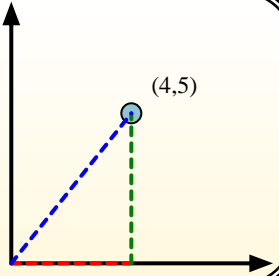


Calculate the angle of the circle relative to (0,0).

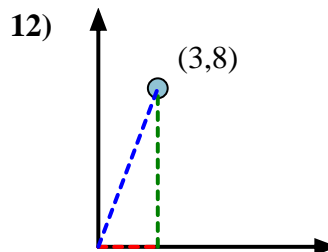
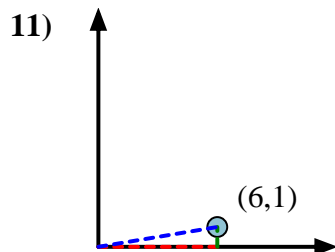
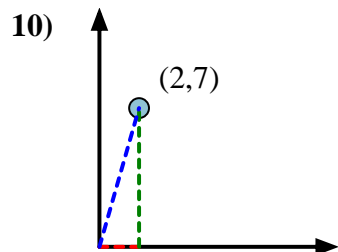
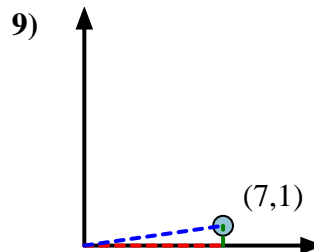
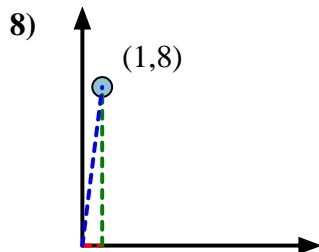
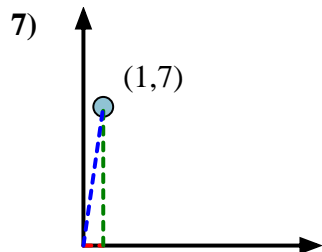
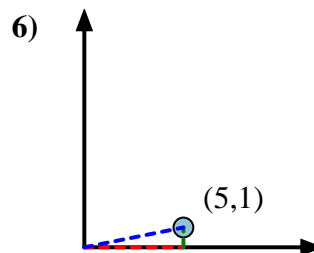
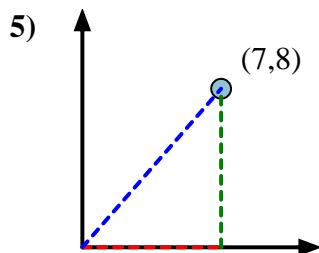
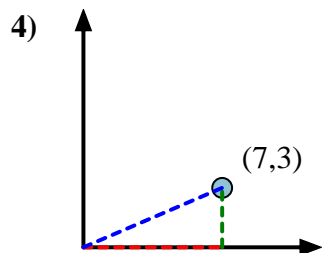
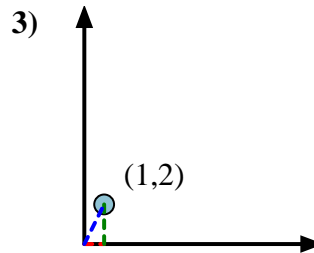
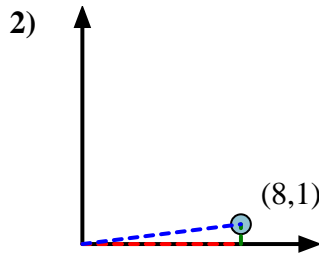
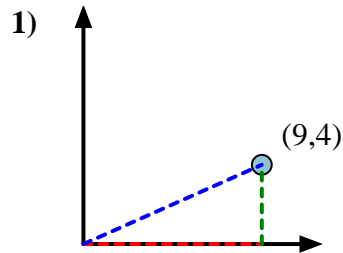


First find the slope.  
 $(y_2 - y_1) \div (x_2 - x_1) = m$   
 $(5 - 0) \div (4 - 0) = 1.25$

Then find the arc tangent (aka. inverse tangent) of the slope.  
 $\arctan(1.25) = 51.34^\circ$



Answers



1. **23.96**

2. **7.13**

3. **63.43**

4. **23.20**

5. **48.81**

6. **11.31**

7. **81.87**

8. **82.87**

9. **8.13**

10. **74.05**

11. **9.46**

12. **69.44**



Calculate the angle of the circle relative to (0,0).

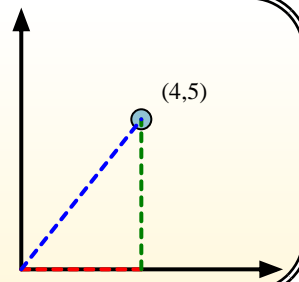
First find the slope.

$$(y_2 - y_1) \div (x_2 - x_1) = m$$

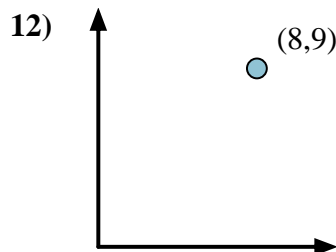
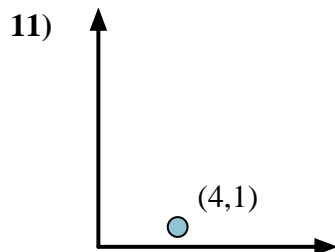
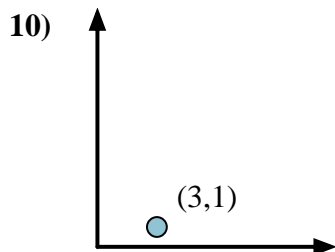
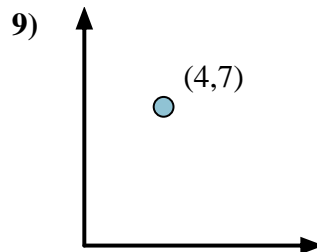
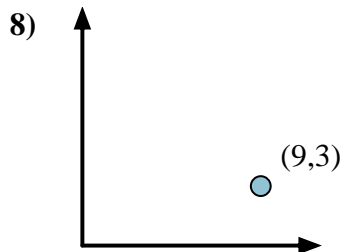
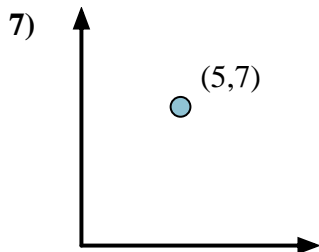
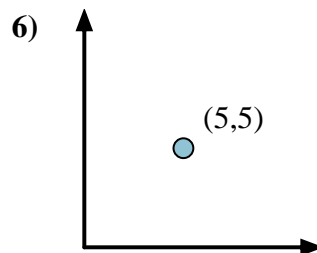
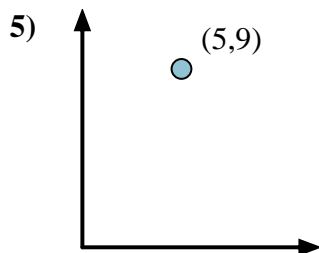
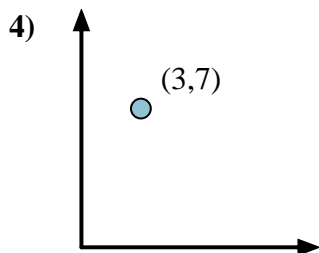
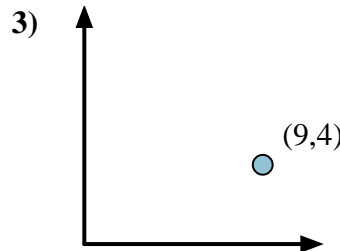
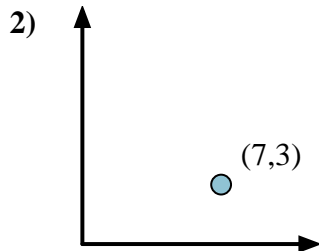
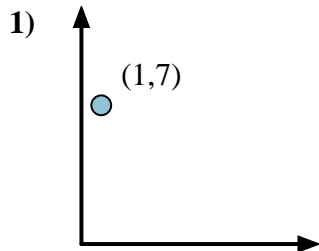
$$(5 - 0) \div (4 - 0) = 1.25$$

Then find the arc tangent (aka. inverse tangent) of the slope.

$$\arctan(1.25) = 51.34^\circ$$



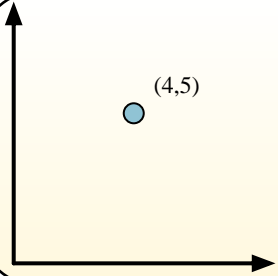
## Answers



1. \_\_\_\_\_
2. \_\_\_\_\_
3. \_\_\_\_\_
4. \_\_\_\_\_
5. \_\_\_\_\_
6. \_\_\_\_\_
7. \_\_\_\_\_
8. \_\_\_\_\_
9. \_\_\_\_\_
10. \_\_\_\_\_
11. \_\_\_\_\_
12. \_\_\_\_\_

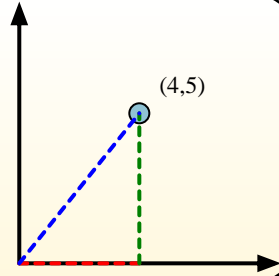


Calculate the angle of the circle relative to (0,0).

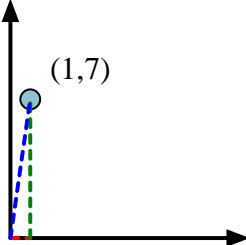
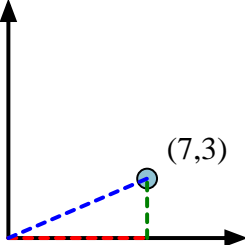
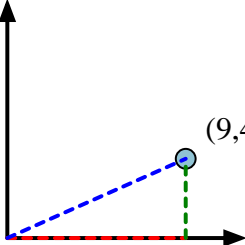
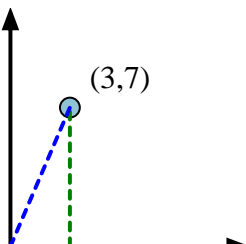
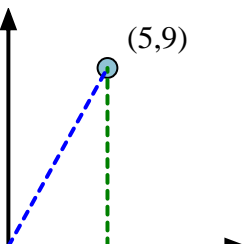
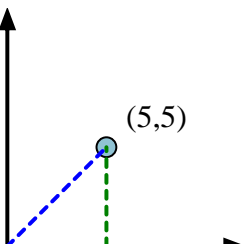
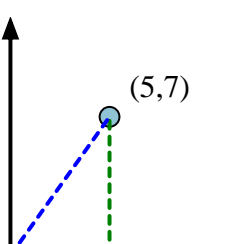
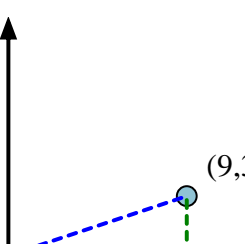
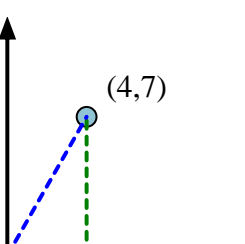
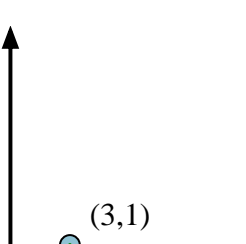
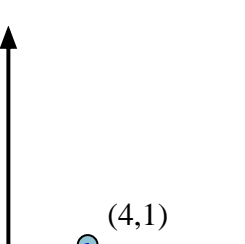
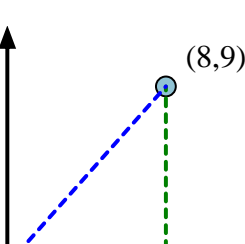


First find the slope.  
 $(y_2 - y_1) \div (x_2 - x_1) = m$   
 $(5 - 0) \div (4 - 0) = 1.25$

Then find the arc tangent (aka. inverse tangent) of the slope.  
 $\arctan(1.25) = 51.34^\circ$



**Answers**

- |   |   |  |
|---|---|--|
| 1)     | 2)     | 3)     |
| 4)    | 5)    | 6)    |
| 7)   | 8)   | 9)   |
| 10)  | 11)  | 12)  |

- |     |              |
|-----|--------------|
| 1.  | <b>81.87</b> |
| 2.  | <b>23.20</b> |
| 3.  | <b>23.96</b> |
| 4.  | <b>66.80</b> |
| 5.  | <b>60.95</b> |
| 6.  | <b>45.00</b> |
| 7.  | <b>54.46</b> |
| 8.  | <b>18.43</b> |
| 9.  | <b>60.26</b> |
| 10. | <b>18.43</b> |
| 11. | <b>14.04</b> |
| 12. | <b>48.37</b> |

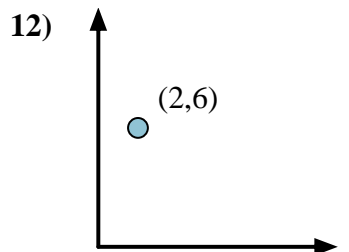
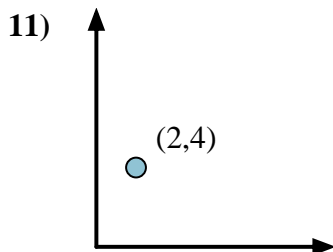
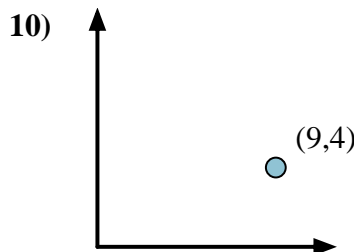
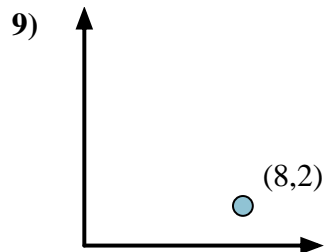
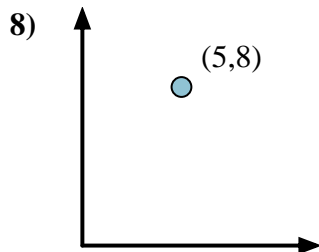
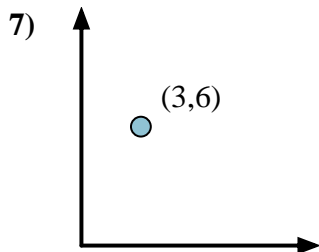
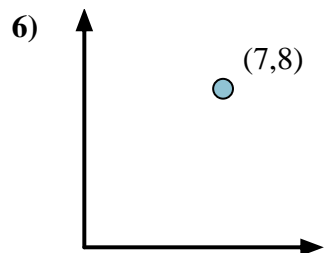
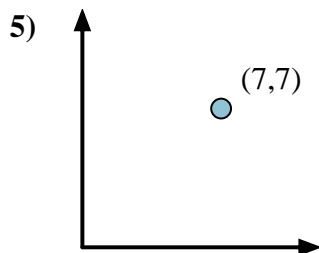
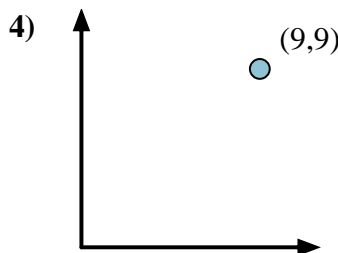
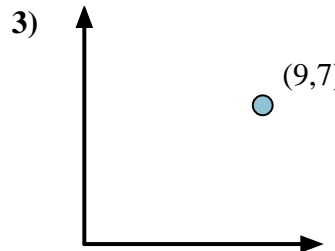
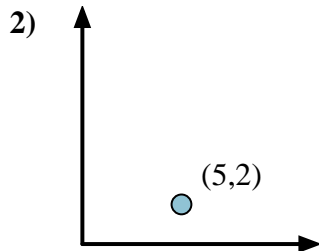
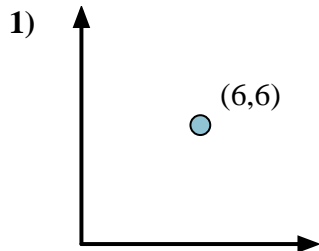


Calculate the angle of the circle relative to (0,0).

First find the slope.  
 $(y_2 - y_1) \div (x_2 - x_1) = m$   
 $(5 - 0) \div (4 - 0) = 1.25$

Then find the arc tangent (aka. inverse tangent) of the slope.  
 $\arctan(1.25) = 51.34^\circ$

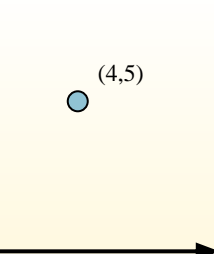
## Answers



1. \_\_\_\_\_
2. \_\_\_\_\_
3. \_\_\_\_\_
4. \_\_\_\_\_
5. \_\_\_\_\_
6. \_\_\_\_\_
7. \_\_\_\_\_
8. \_\_\_\_\_
9. \_\_\_\_\_
10. \_\_\_\_\_
11. \_\_\_\_\_
12. \_\_\_\_\_

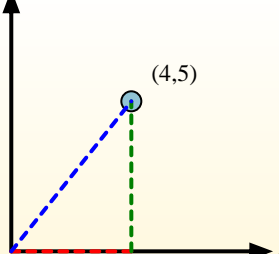


Calculate the angle of the circle relative to (0,0).

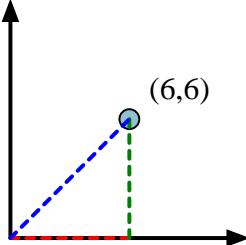
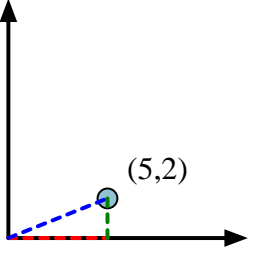
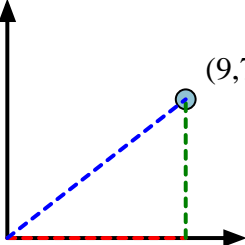
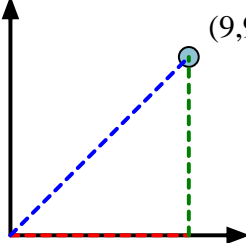
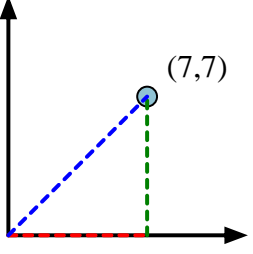
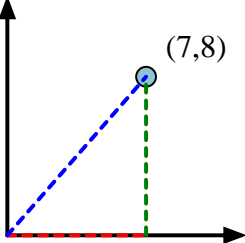
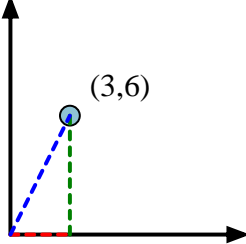
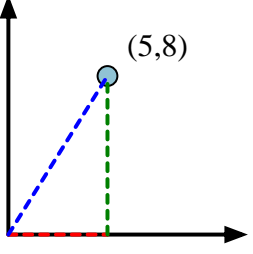
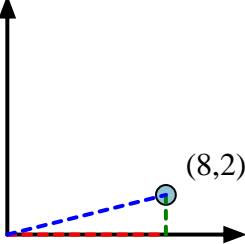
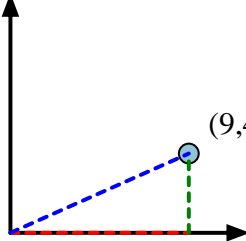
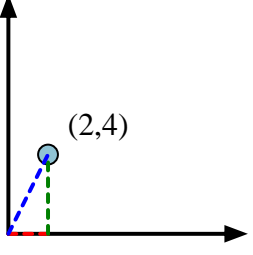
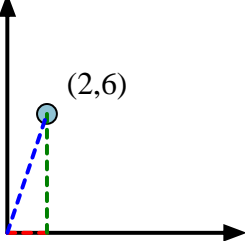


First find the slope.  
 $(y_2 - y_1) \div (x_2 - x_1) = m$   
 $(5 - 0) \div (4 - 0) = 1.25$

Then find the arc tangent (aka. inverse tangent) of the slope.  
 $\arctan(1.25) = 51.34^\circ$



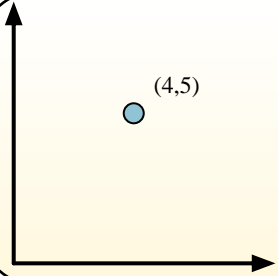
**Answers**

- |   |   |  |
|---|---|--|
| 1)     | 2)     | 3)     |
| 4)    | 5)    | 6)    |
| 7)   | 8)   | 9)   |
| 10)  | 11)  | 12)  |

- |     |              |
|-----|--------------|
| 1.  | <b>45.00</b> |
| 2.  | <b>21.80</b> |
| 3.  | <b>37.87</b> |
| 4.  | <b>45.00</b> |
| 5.  | <b>45.00</b> |
| 6.  | <b>48.81</b> |
| 7.  | <b>63.43</b> |
| 8.  | <b>57.99</b> |
| 9.  | <b>14.04</b> |
| 10. | <b>23.96</b> |
| 11. | <b>63.43</b> |
| 12. | <b>71.57</b> |

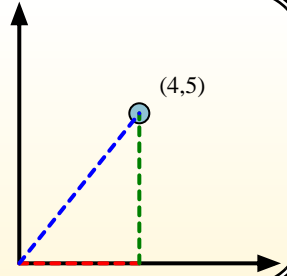


Calculate the angle of the circle relative to (0,0).

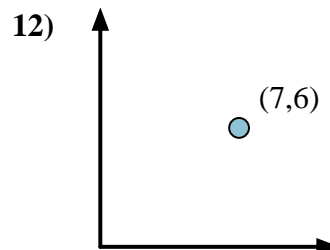
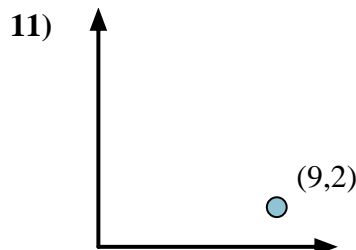
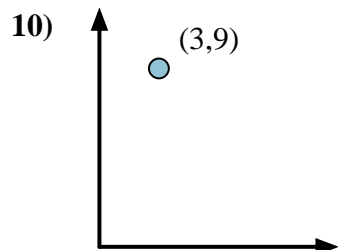
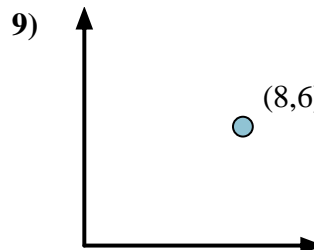
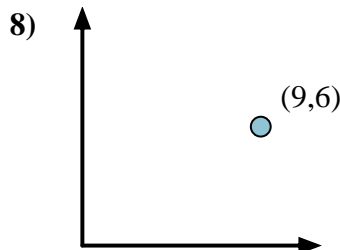
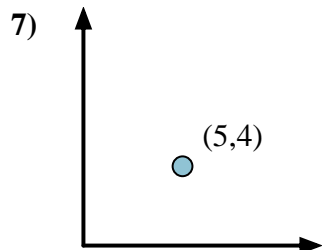
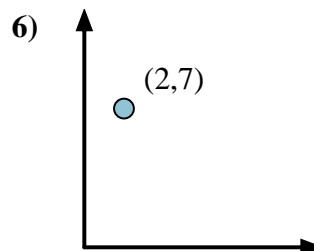
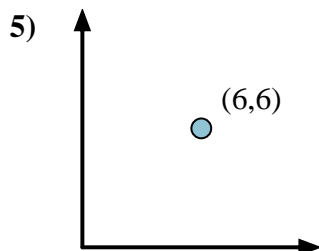
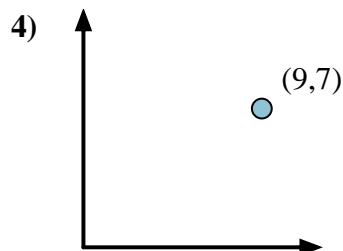
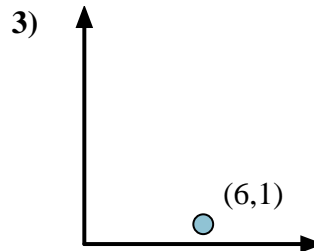
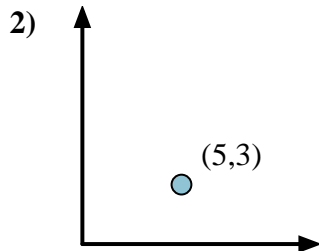
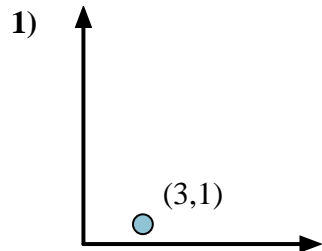


First find the slope.  
 $(y_2 - y_1) \div (x_2 - x_1) = m$   
 $(5 - 0) \div (4 - 0) = 1.25$

Then find the arc tangent (aka. inverse tangent) of the slope.  
 $\arctan(1.25) = 51.34^\circ$



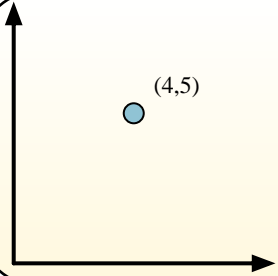
## Answers



1. \_\_\_\_\_
2. \_\_\_\_\_
3. \_\_\_\_\_
4. \_\_\_\_\_
5. \_\_\_\_\_
6. \_\_\_\_\_
7. \_\_\_\_\_
8. \_\_\_\_\_
9. \_\_\_\_\_
10. \_\_\_\_\_
11. \_\_\_\_\_
12. \_\_\_\_\_

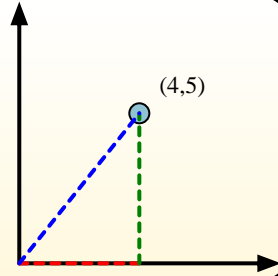


Calculate the angle of the circle relative to (0,0).

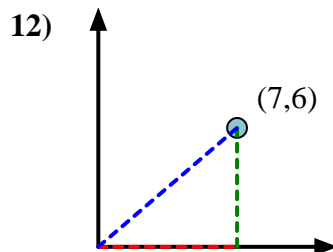
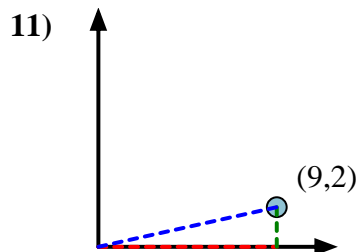
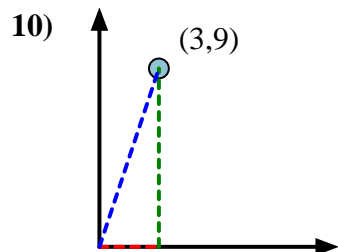
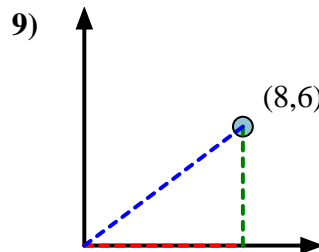
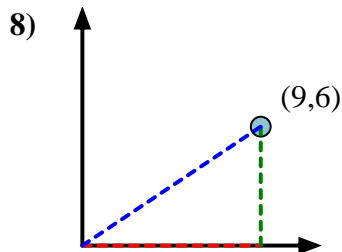
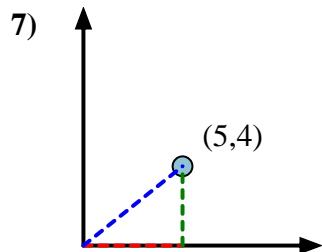
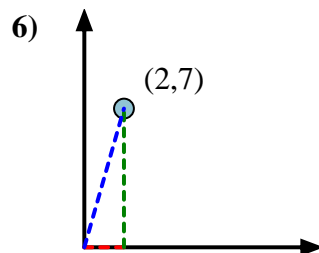
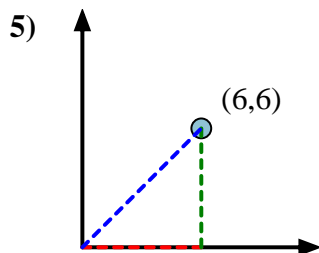
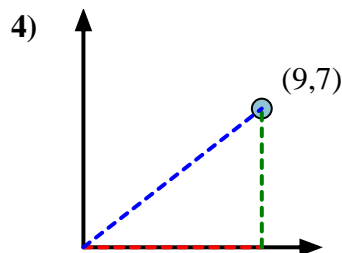
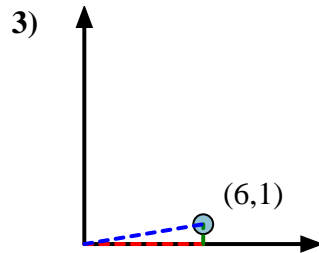
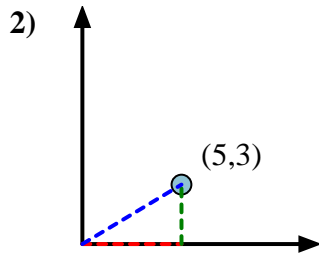
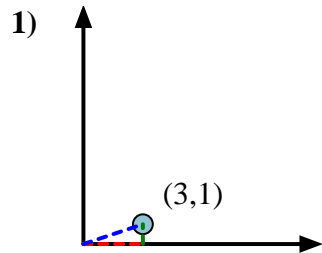


First find the slope.  
 $(y_2 - y_1) \div (x_2 - x_1) = m$   
 $(5 - 0) \div (4 - 0) = 1.25$

Then find the arc tangent (aka. inverse tangent) of the slope.  
 $\arctan(1.25) = 51.34^\circ$



Answers

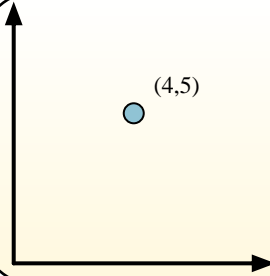


1. 18.43
2. 30.96
3. 9.46
4. 37.87
5. 45.00
6. 74.05
7. 38.66
8. 33.69
9. 36.87
10. 71.57
11. 12.53
12. 40.60



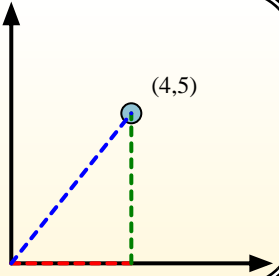


Calculate the angle of the circle relative to (0,0).

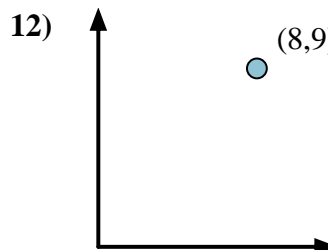
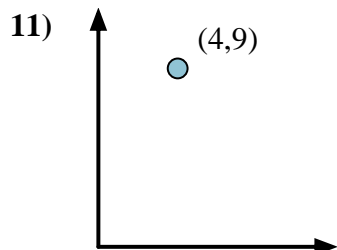
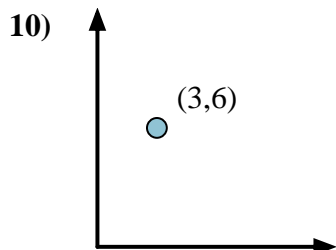
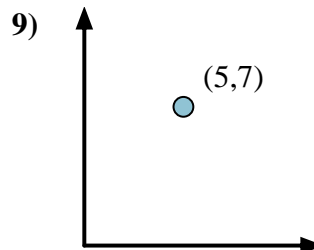
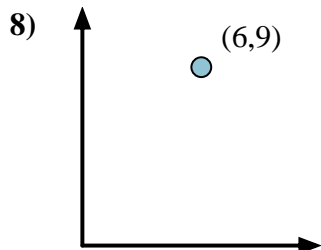
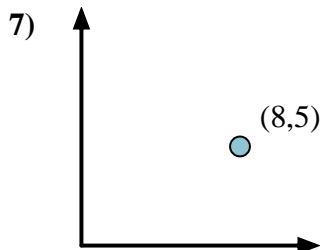
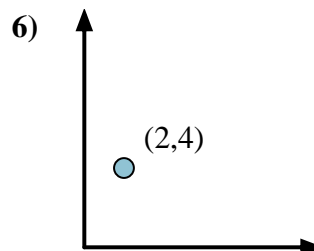
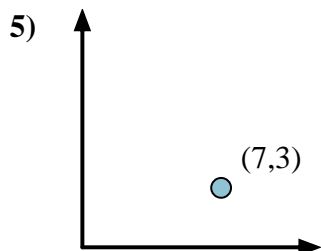
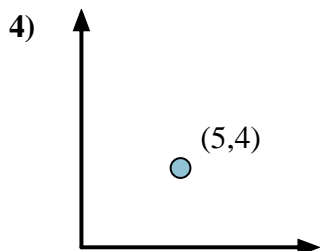
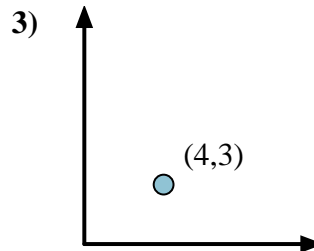
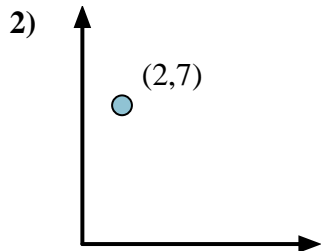
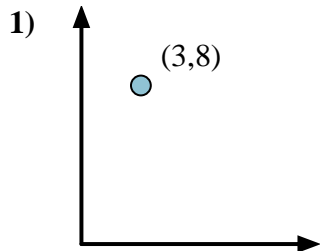


First find the slope.  
 $(y_2 - y_1) \div (x_2 - x_1) = m$   
 $(5 - 0) \div (4 - 0) = 1.25$

Then find the arc tangent (aka. inverse tangent) of the slope.  
 $\arctan(1.25) = 51.34^\circ$




## Answers



1. \_\_\_\_\_
2. \_\_\_\_\_
3. \_\_\_\_\_
4. \_\_\_\_\_
5. \_\_\_\_\_
6. \_\_\_\_\_
7. \_\_\_\_\_
8. \_\_\_\_\_
9. \_\_\_\_\_
10. \_\_\_\_\_
11. \_\_\_\_\_
12. \_\_\_\_\_

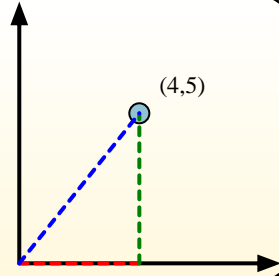


Calculate the angle of the circle relative to (0,0).

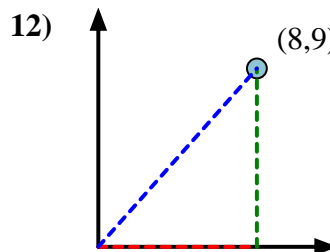
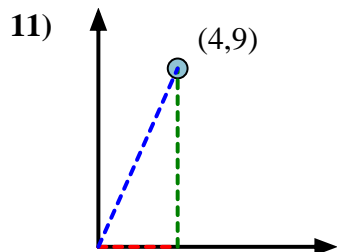
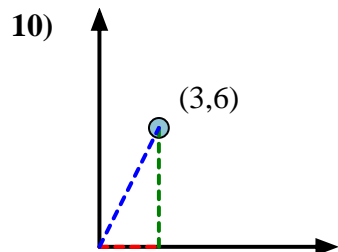
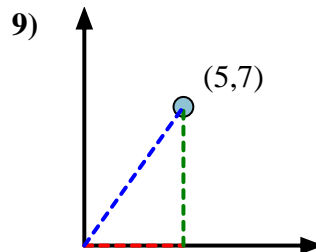
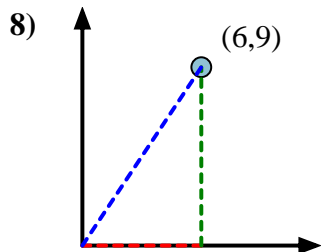
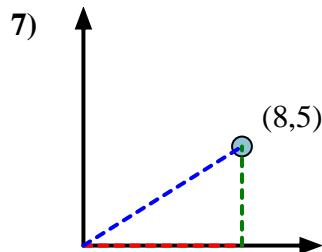
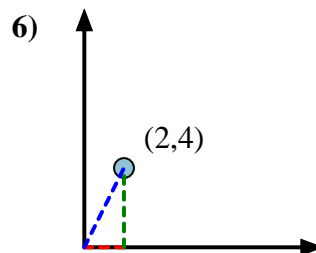
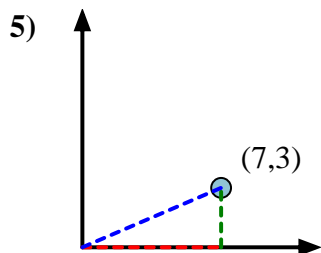
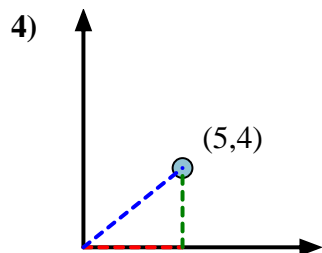
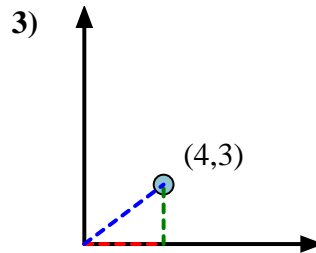
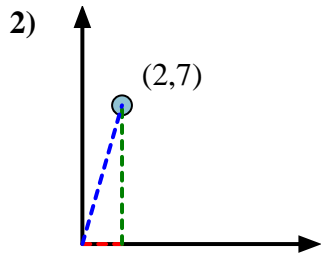
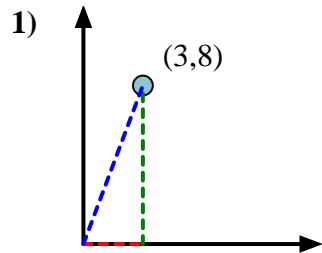


First find the slope.  
 $(y_2 - y_1) \div (x_2 - x_1) = m$   
 $(5 - 0) \div (4 - 0) = 1.25$

Then find the arc tangent (aka. inverse tangent) of the slope.  
 $\arctan(1.25) = 51.34^\circ$



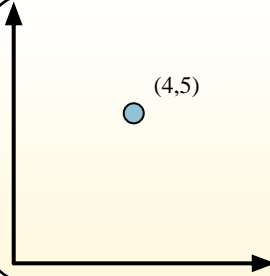
Answers



1. 69.44
2. 74.05
3. 36.87
4. 38.66
5. 23.20
6. 63.43
7. 32.01
8. 56.31
9. 54.46
10. 63.43
11. 66.04
12. 48.37

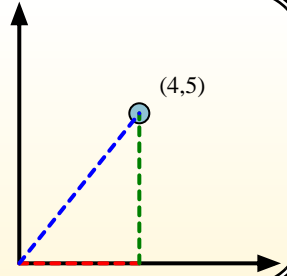


Calculate the angle of the circle relative to (0,0).

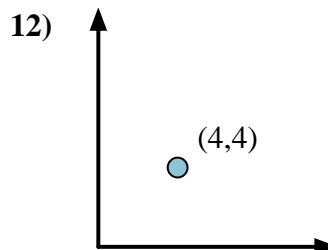
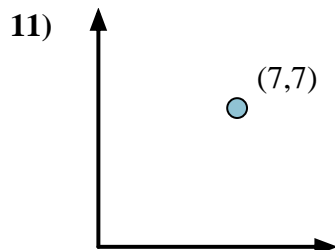
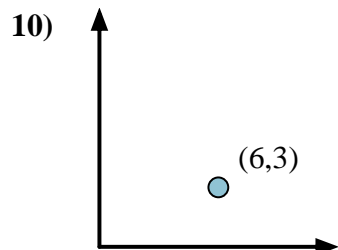
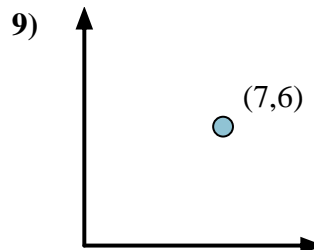
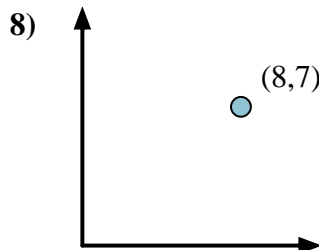
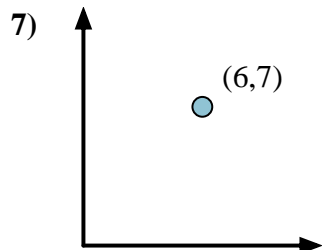
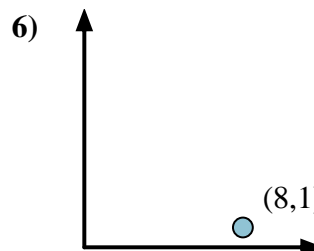
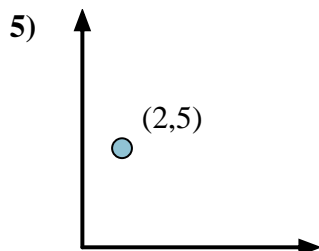
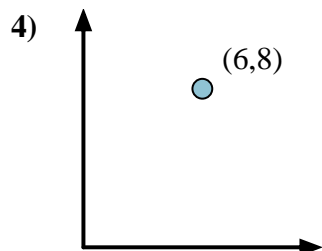
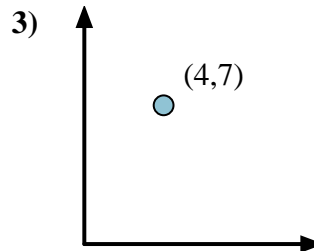
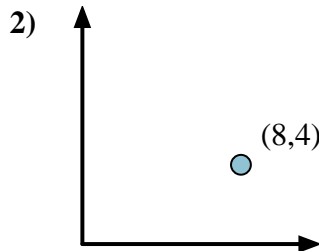
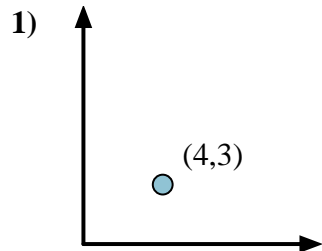


First find the slope.  
 $(y_2 - y_1) \div (x_2 - x_1) = m$   
 $(5 - 0) \div (4 - 0) = 1.25$

Then find the arc tangent (aka. inverse tangent) of the slope.  
 $\arctan(1.25) = 51.34^\circ$



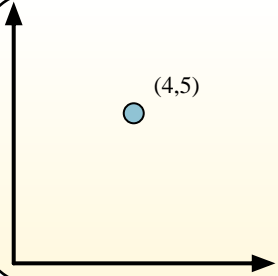
## Answers



1. \_\_\_\_\_
2. \_\_\_\_\_
3. \_\_\_\_\_
4. \_\_\_\_\_
5. \_\_\_\_\_
6. \_\_\_\_\_
7. \_\_\_\_\_
8. \_\_\_\_\_
9. \_\_\_\_\_
10. \_\_\_\_\_
11. \_\_\_\_\_
12. \_\_\_\_\_




Calculate the angle of the circle relative to (0,0).

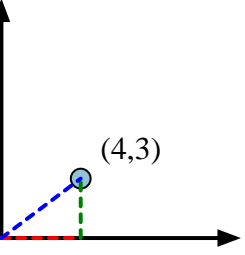
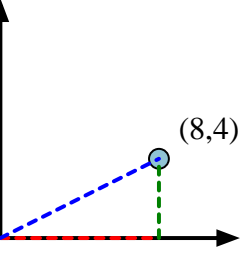
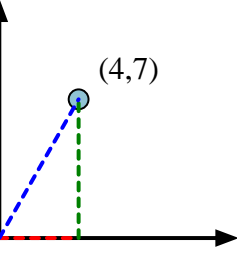
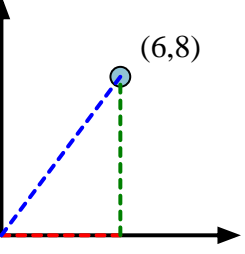
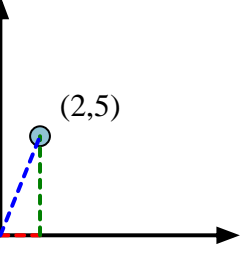
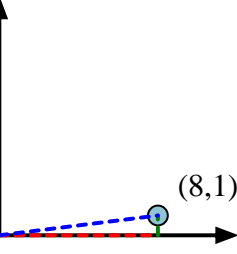
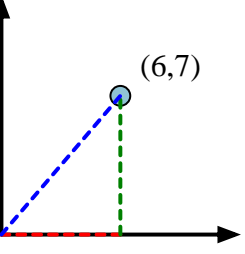
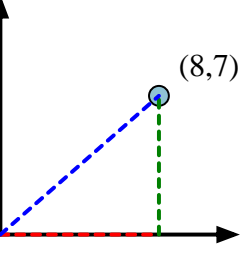
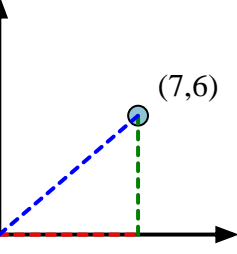
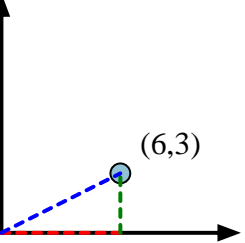
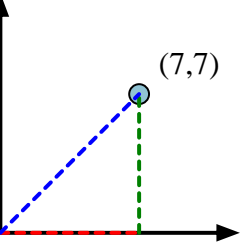
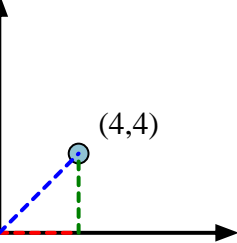


First find the slope.  
 $(y_2 - y_1) \div (x_2 - x_1) = m$   
 $(5 - 0) \div (4 - 0) = 1.25$

Then find the arc tangent (aka. inverse tangent) of the slope.  
 $\arctan(1.25) = 51.34^\circ$



**Answers**

- 1) 
- 2) 
- 3) 
- 4) 
- 5) 
- 6) 
- 7) 
- 8) 
- 9) 
- 10) 
- 11) 
- 12) 

1. 36.87
2. 26.57
3. 60.26
4. 53.13
5. 68.20
6. 7.13
7. 49.40
8. 41.19
9. 40.60
10. 26.57
11. 45.00
12. 45.00



Calculate the angle of the circle relative to (0,0).

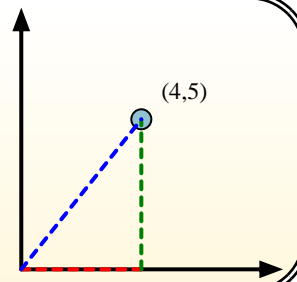
First find the slope.

$$(y_2 - y_1) \div (x_2 - x_1) = m$$

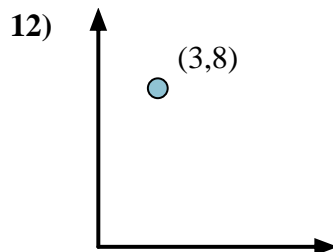
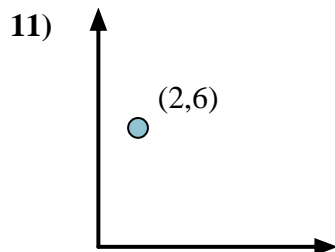
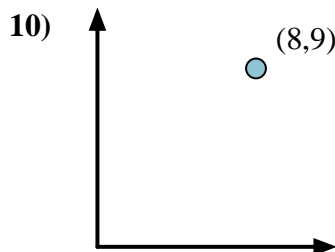
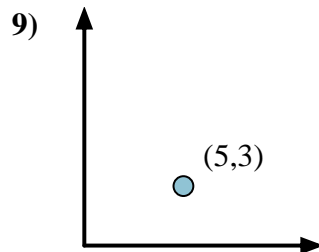
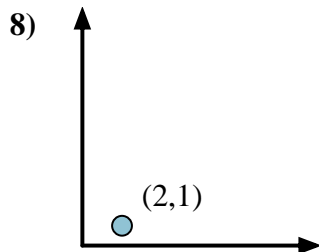
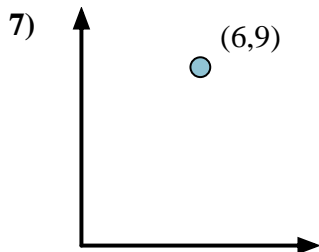
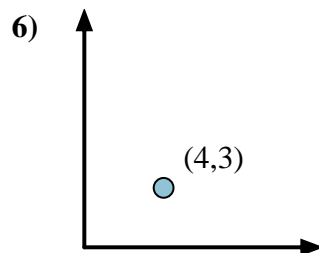
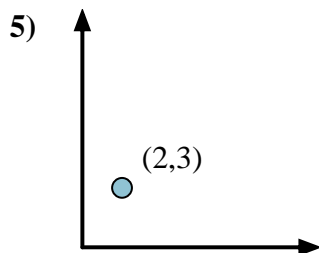
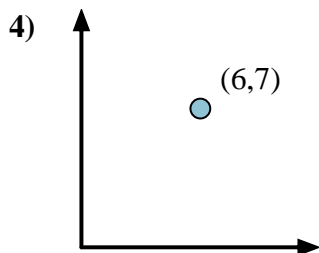
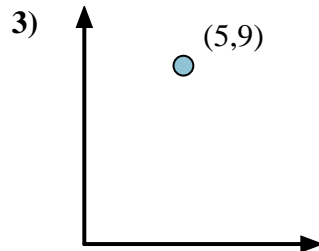
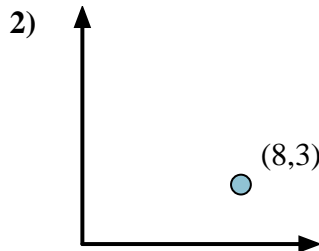
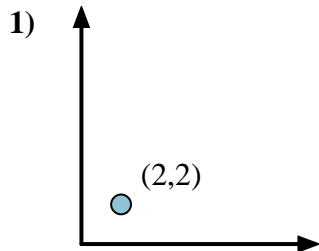
$$(5 - 0) \div (4 - 0) = 1.25$$

Then find the arc tangent (aka. inverse tangent) of the slope.

$$\arctan(1.25) = 51.34^\circ$$




## Answers



1. \_\_\_\_\_
2. \_\_\_\_\_
3. \_\_\_\_\_
4. \_\_\_\_\_
5. \_\_\_\_\_
6. \_\_\_\_\_
7. \_\_\_\_\_
8. \_\_\_\_\_
9. \_\_\_\_\_
10. \_\_\_\_\_
11. \_\_\_\_\_
12. \_\_\_\_\_

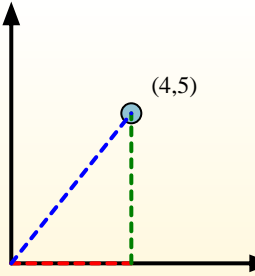


Calculate the angle of the circle relative to (0,0).

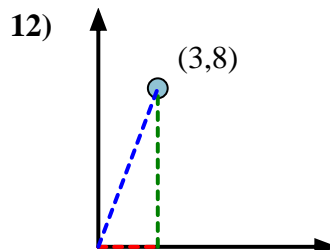
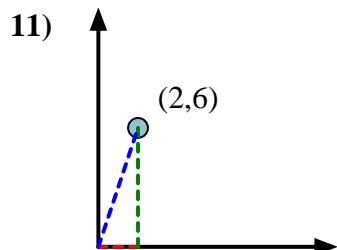
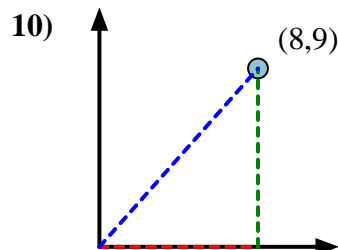
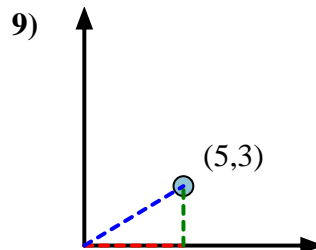
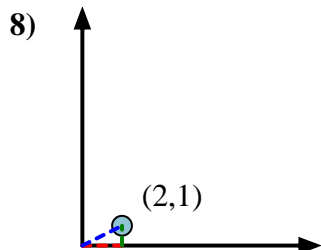
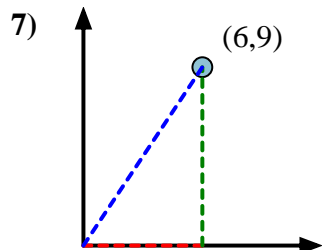
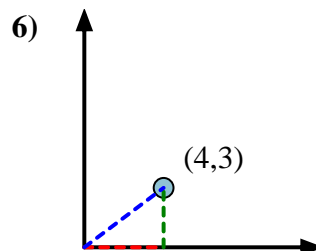
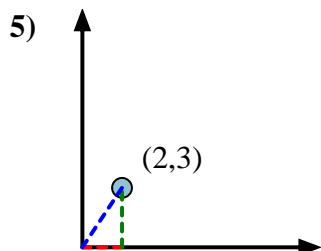
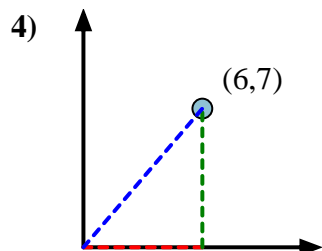
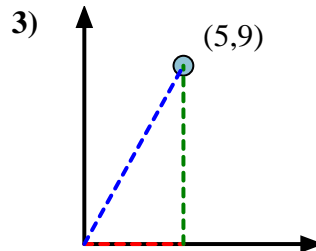
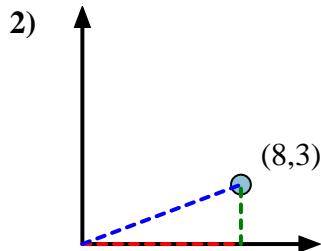
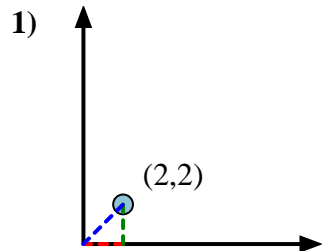


First find the slope.  
 $(y_2 - y_1) \div (x_2 - x_1) = m$   
 $(5 - 0) \div (4 - 0) = 1.25$

Then find the arc tangent (aka. inverse tangent) of the slope.  
 $\arctan(1.25) = 51.34^\circ$



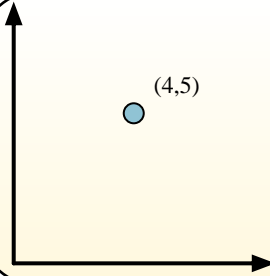
Answers



1. 45.00
2. 20.56
3. 60.95
4. 49.40
5. 56.31
6. 36.87
7. 56.31
8. 26.57
9. 30.96
10. 48.37
11. 71.57
12. 69.44




Calculate the angle of the circle relative to (0,0).

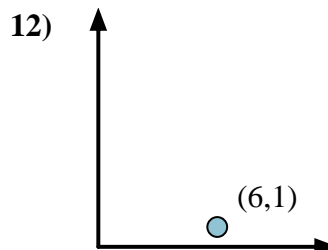
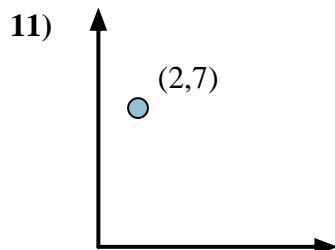
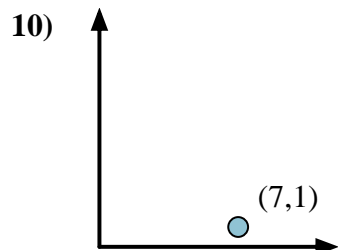
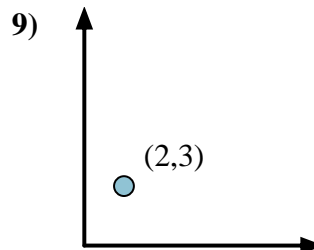
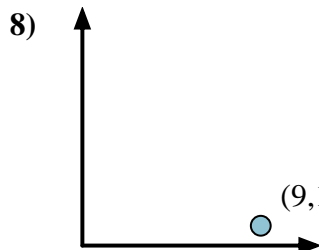
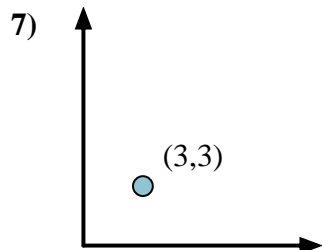
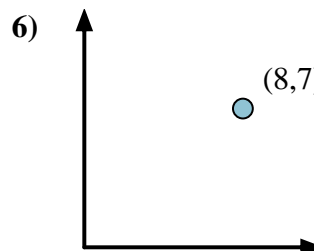
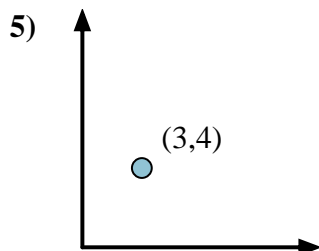
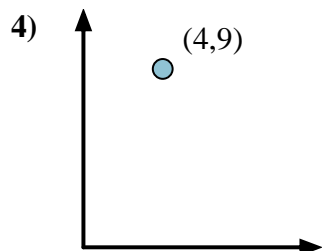
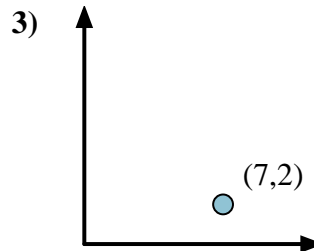
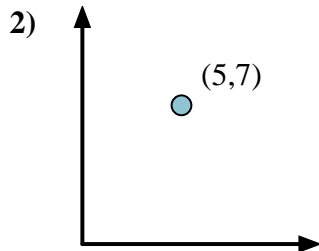
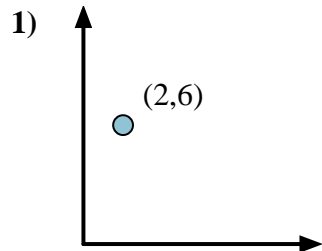


First find the slope.  
 $(y_2 - y_1) \div (x_2 - x_1) = m$   
 $(5 - 0) \div (4 - 0) = 1.25$

Then find the arc tangent (aka. inverse tangent) of the slope.  
 $\arctan(1.25) = 51.34^\circ$



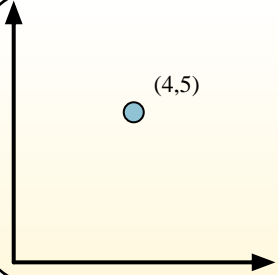
## Answers



1. \_\_\_\_\_
2. \_\_\_\_\_
3. \_\_\_\_\_
4. \_\_\_\_\_
5. \_\_\_\_\_
6. \_\_\_\_\_
7. \_\_\_\_\_
8. \_\_\_\_\_
9. \_\_\_\_\_
10. \_\_\_\_\_
11. \_\_\_\_\_
12. \_\_\_\_\_

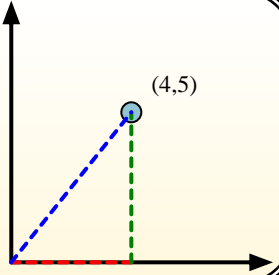


Calculate the angle of the circle relative to (0,0).

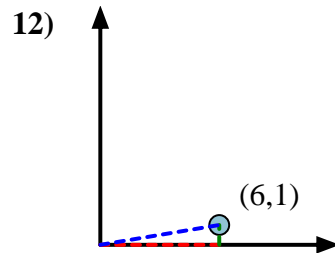
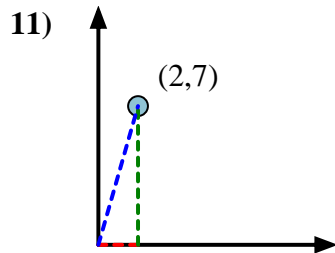
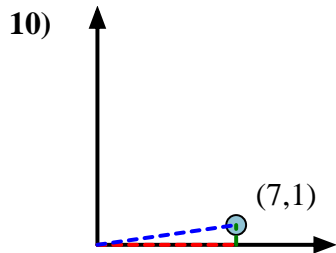
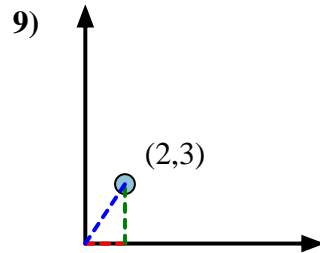
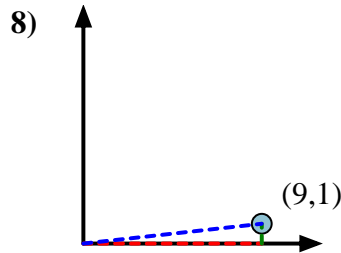
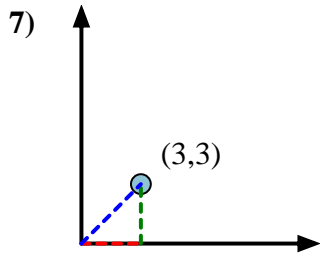
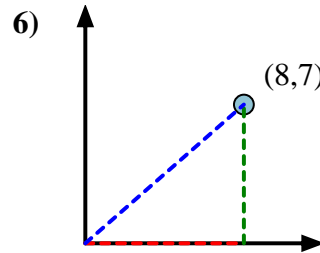
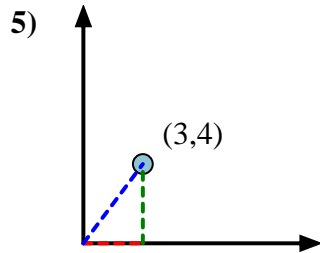
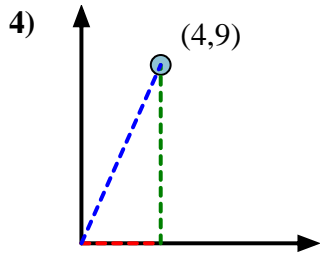
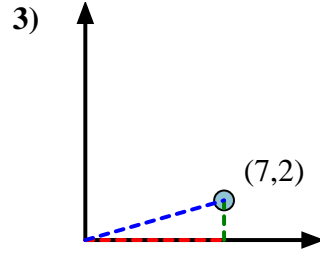
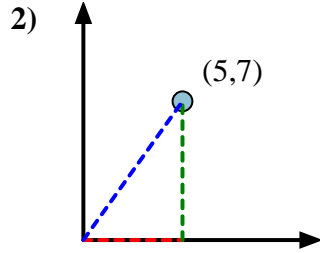
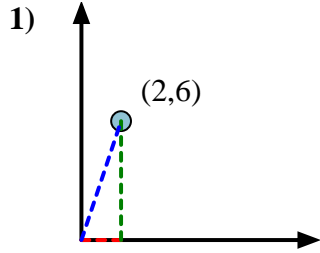


First find the slope.  
 $(y_2 - y_1) \div (x_2 - x_1) = m$   
 $(5 - 0) \div (4 - 0) = 1.25$

Then find the arc tangent (aka. inverse tangent) of the slope.  
 $\arctan(1.25) = 51.34^\circ$



**Answers**



1. 71.57
2. 54.46
3. 15.95
4. 66.04
5. 53.13
6. 41.19
7. 45.00
8. 6.34
9. 56.31
10. 8.13
11. 74.05
12. 9.46





Calculate the angle of the circle relative to (0,0).

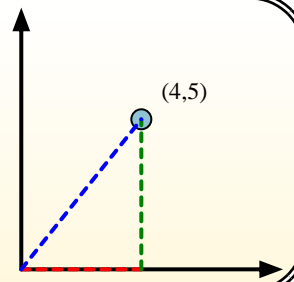
First find the slope.

$$(y_2 - y_1) \div (x_2 - x_1) = m$$

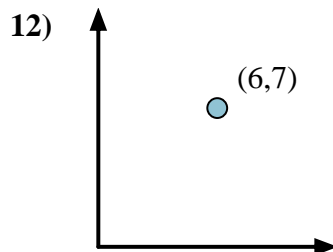
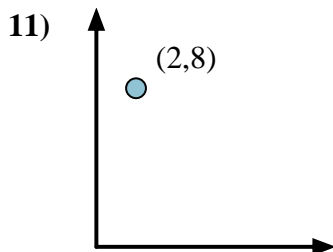
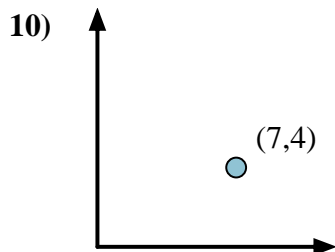
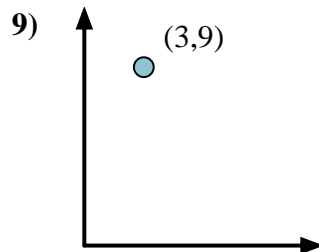
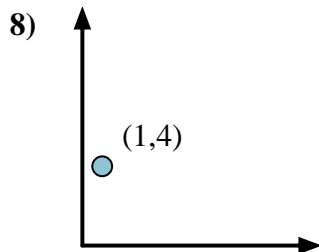
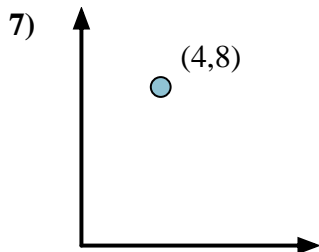
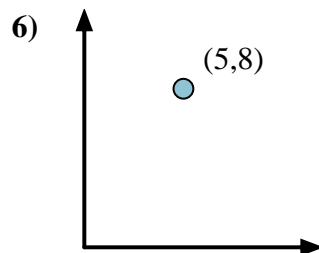
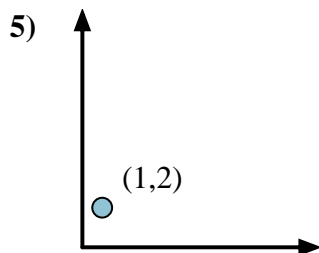
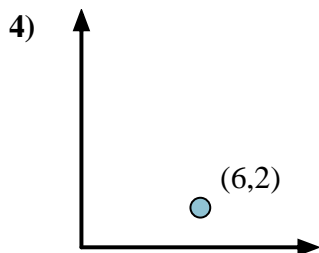
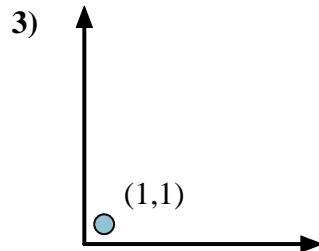
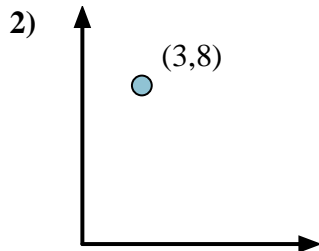
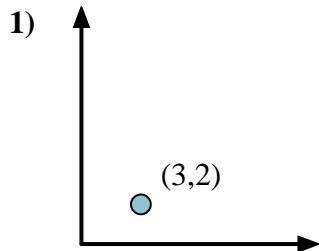
$$(5 - 0) \div (4 - 0) = 1.25$$

Then find the arc tangent (aka. inverse tangent) of the slope.

$$\arctan(1.25) = 51.34^\circ$$



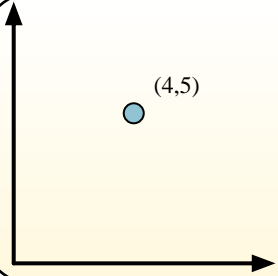
## Answers



1. \_\_\_\_\_
2. \_\_\_\_\_
3. \_\_\_\_\_
4. \_\_\_\_\_
5. \_\_\_\_\_
6. \_\_\_\_\_
7. \_\_\_\_\_
8. \_\_\_\_\_
9. \_\_\_\_\_
10. \_\_\_\_\_
11. \_\_\_\_\_
12. \_\_\_\_\_

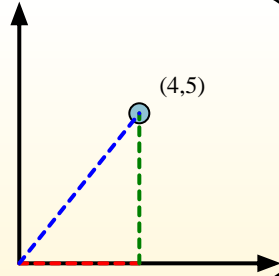


Calculate the angle of the circle relative to (0,0).

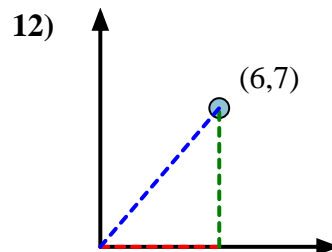
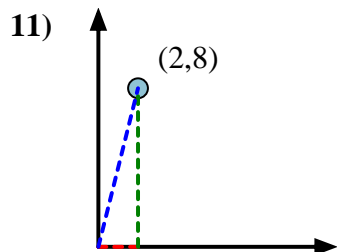
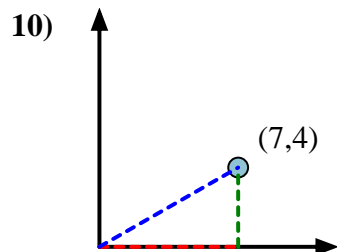
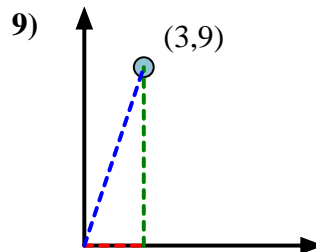
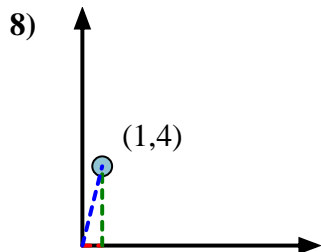
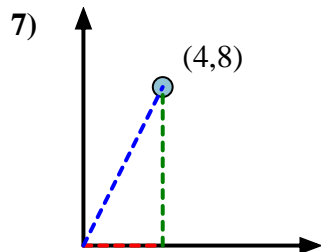
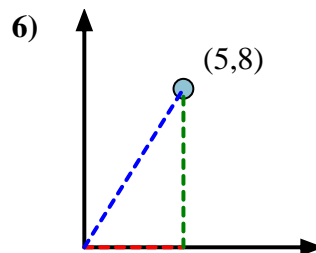
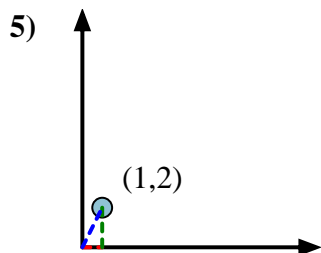
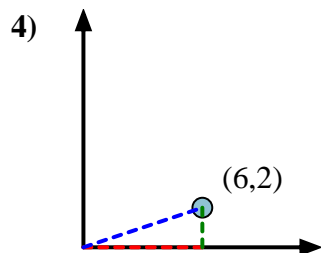
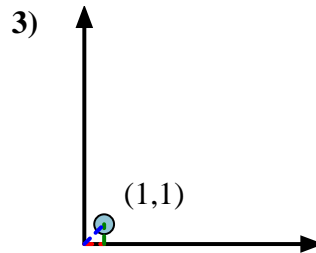
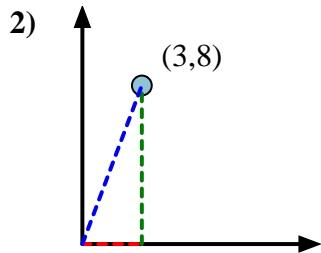
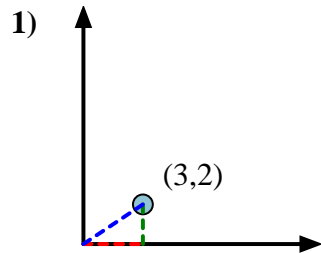


First find the slope.  
 $(y_2 - y_1) \div (x_2 - x_1) = m$   
 $(5 - 0) \div (4 - 0) = 1.25$

Then find the arc tangent (aka. inverse tangent) of the slope.  
 $\arctan(1.25) = 51.34^\circ$



Answers



1. 33.69
2. 69.44
3. 45.00
4. 18.43
5. 63.43
6. 57.99
7. 63.43
8. 75.96
9. 71.57
10. 29.74
11. 75.96
12. 49.40

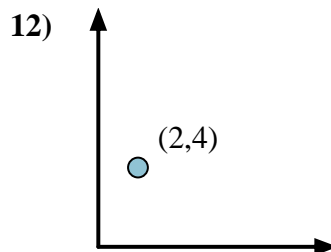
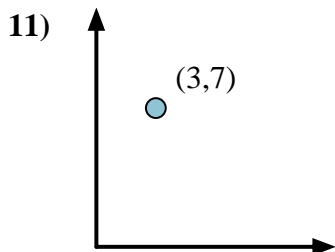
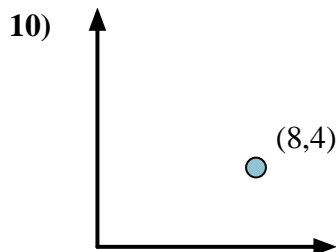
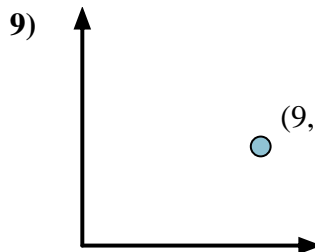
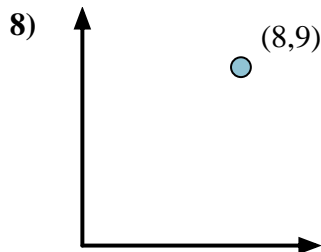
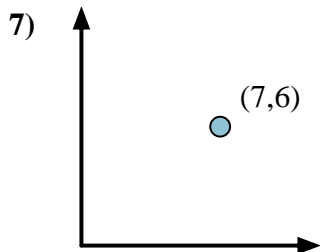
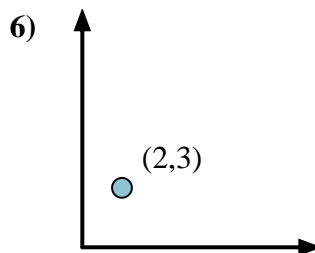
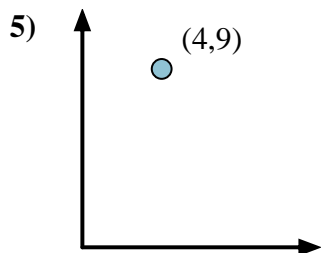
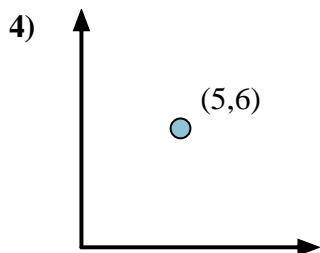
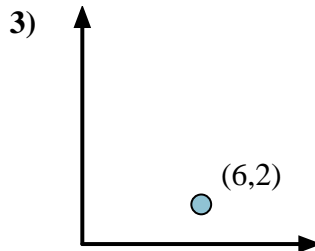
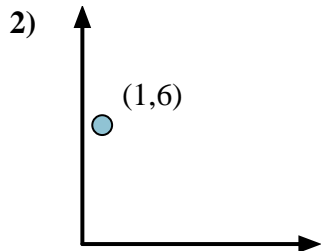
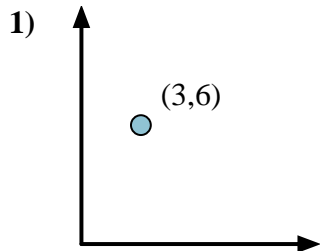


Calculate the angle of the circle relative to (0,0).

First find the slope.  
 $(y_2 - y_1) \div (x_2 - x_1) = m$   
 $(5 - 0) \div (4 - 0) = 1.25$

Then find the arc tangent (aka. inverse tangent) of the slope.  
 $\arctan(1.25) = 51.34^\circ$


**Answers**



1. \_\_\_\_\_
2. \_\_\_\_\_
3. \_\_\_\_\_
4. \_\_\_\_\_
5. \_\_\_\_\_
6. \_\_\_\_\_
7. \_\_\_\_\_
8. \_\_\_\_\_
9. \_\_\_\_\_
10. \_\_\_\_\_
11. \_\_\_\_\_
12. \_\_\_\_\_

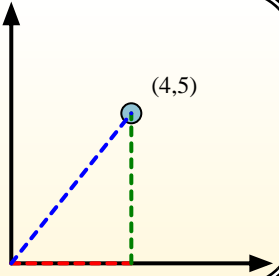


Calculate the angle of the circle relative to (0,0).

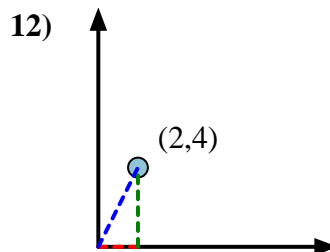
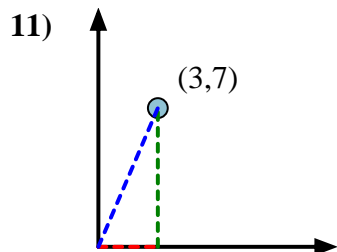
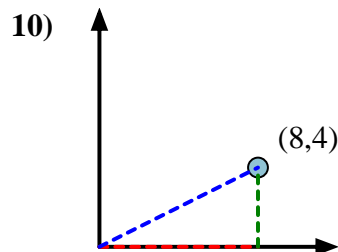
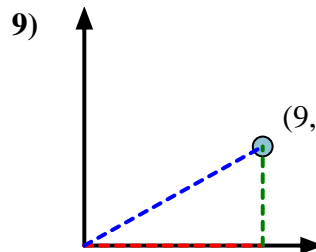
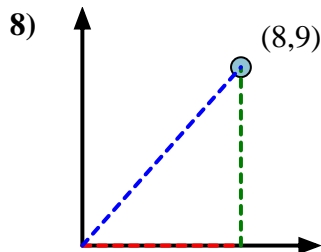
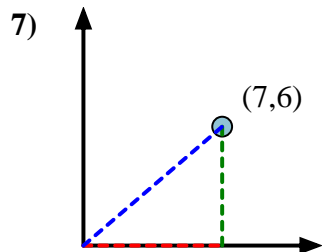
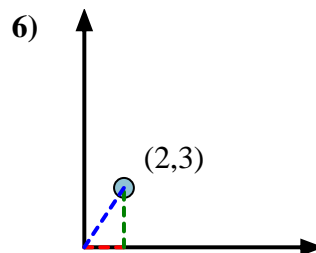
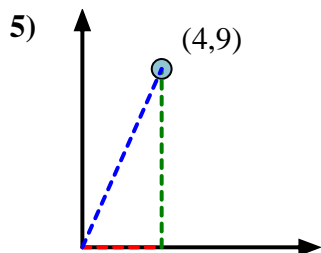
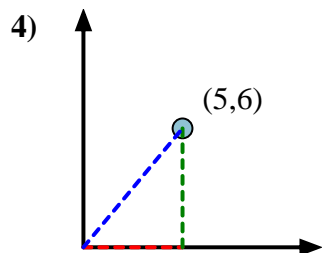
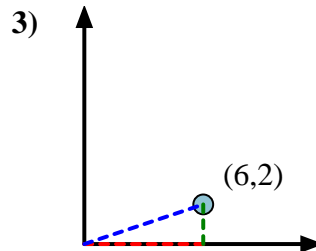
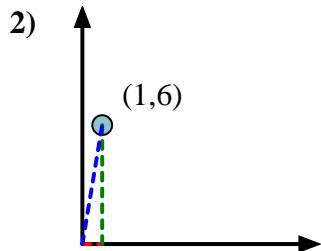
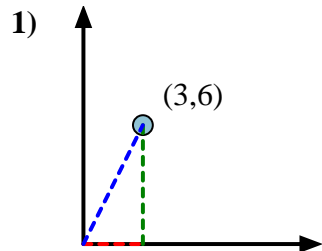


First find the slope.  
 $(y_2 - y_1) \div (x_2 - x_1) = m$   
 $(5 - 0) \div (4 - 0) = 1.25$

Then find the arc tangent (aka. inverse tangent) of the slope.  
 $\arctan(1.25) = 51.34^\circ$



Answers



1. 63.43
2. 80.54
3. 18.43
4. 50.19
5. 66.04
6. 56.31
7. 40.60
8. 48.37
9. 29.05
10. 26.57
11. 66.80
12. 63.43