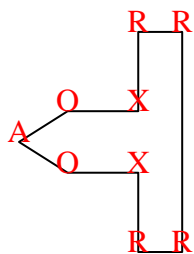




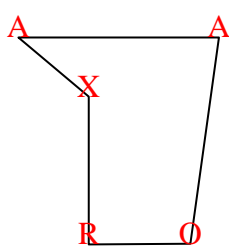


Count the number of Acute, Obtuse, Right and Reflex angles in each shape.

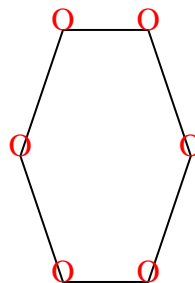
Ex)



1)



2)



Answers

Ex. 1 2 4 2

1. 2 1 1 1

2. 0 0 6 0

3. 0 3 2 0

4. 4 0 0 3

5. 0 2 3 0

6. 2 2 0 0

7. 1 1 2 0

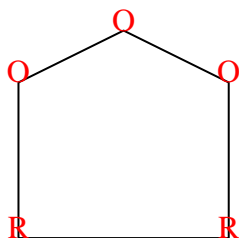
8. 1 2 1 0

9. 2 2 0 0

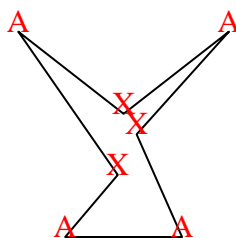
10. 2 4 1 2

11. 2 1 4 4

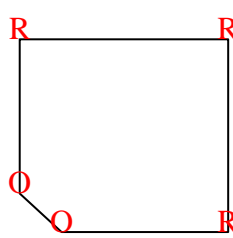
3)



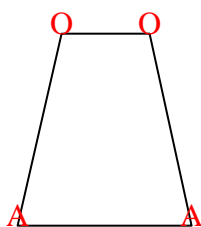
4)



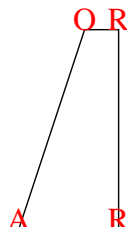
5)



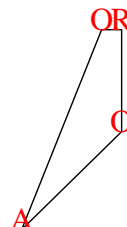
6)



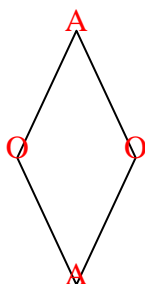
7)



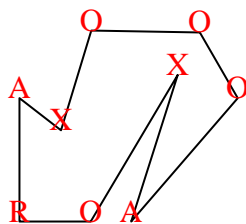
8)



9)



10)



11)

