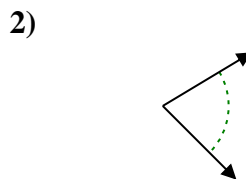

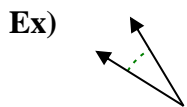




Determine if the angle shown is acute, obtuse, right or straight.

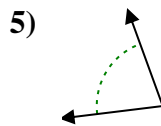
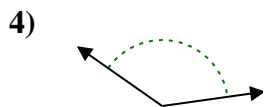
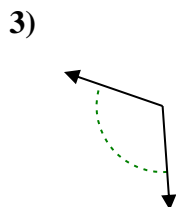
Answers



Ex. **acute**

1. \_\_\_\_\_

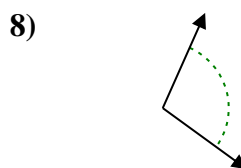
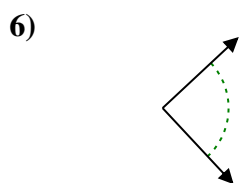
2. \_\_\_\_\_



3. \_\_\_\_\_

4. \_\_\_\_\_

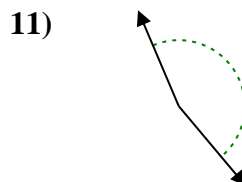
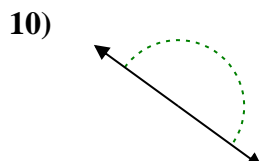
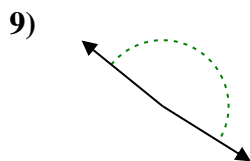
5. \_\_\_\_\_



6. \_\_\_\_\_

7. \_\_\_\_\_

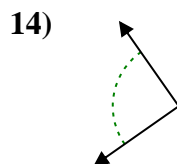
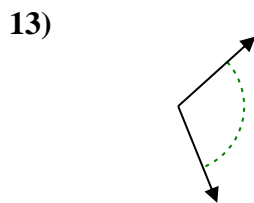
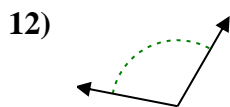
8. \_\_\_\_\_



9. \_\_\_\_\_

10. \_\_\_\_\_

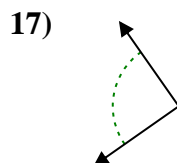
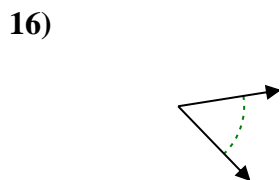
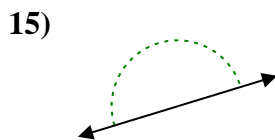
11. \_\_\_\_\_



12. \_\_\_\_\_

13. \_\_\_\_\_

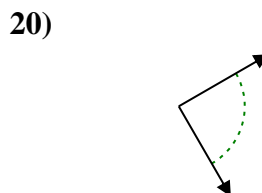
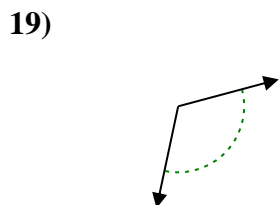
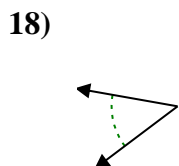
14. \_\_\_\_\_



15. \_\_\_\_\_

16. \_\_\_\_\_

17. \_\_\_\_\_



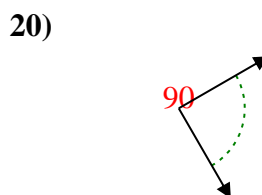
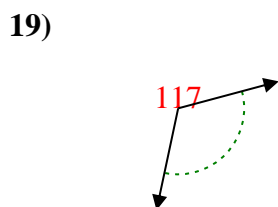
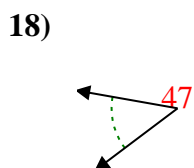
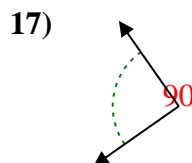
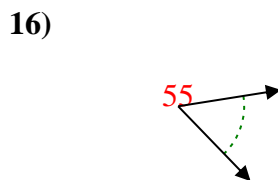
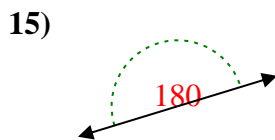
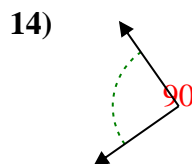
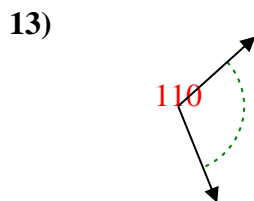
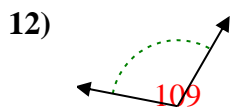
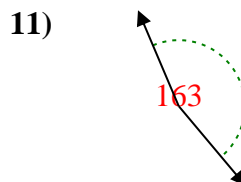
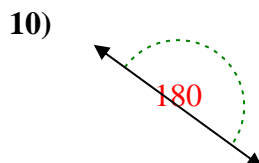
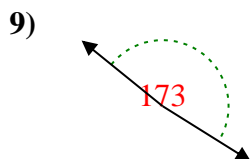
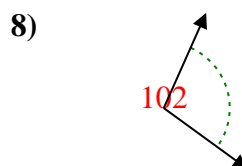
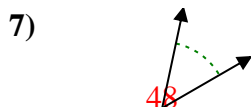
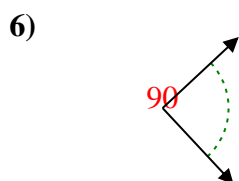
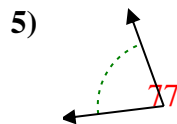
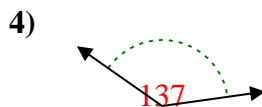
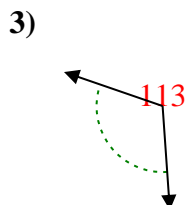
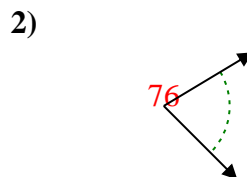
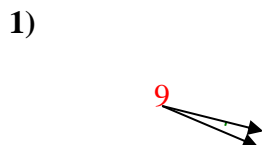
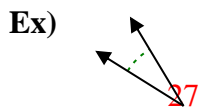
18. \_\_\_\_\_

19. \_\_\_\_\_

20. \_\_\_\_\_



Determine if the angle shown is acute, obtuse, right or straight.



Answers

Ex. **acute**

1. **acute**

2. **acute**

3. **obtuse**

4. **obtuse**

5. **acute**

6. **right**

7. **acute**

8. **obtuse**

9. **obtuse**

10. **straight**

11. **obtuse**

12. **obtuse**

13. **obtuse**

14. **right**

15. **straight**

16. **acute**

17. **right**

18. **acute**

19. **obtuse**

20. **right**