



Solve each problem using a tape diagram.

Answers

1) A waiter has 62 customers. If 24 left, how many customers would the waiter still have?

1. _____

2) There were 72 people on the train. At the first stop 42 people got off. How many people are left on the train?

2. _____

3. _____

3) While playing a game Oliver had 69 lives. He lost 40 lives on a hard level. How many lives does he have left?

4. _____

5. _____

4) Paige could send 68 text messages a day. If she sent 44, how many text messages does she have left she can send?

6. _____

7. _____

5) Gwen had 87 pencils. If she used 39 of them, how many would she have left?

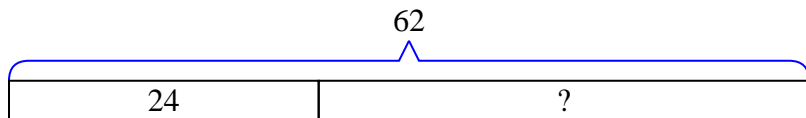
6) A baker made 27 cakes. 15 were chocolate and the rest were vanilla. How many cakes were vanilla?

7) At the arcade Victor had won 58 tickets total. He won 34 of them while playing Whack-A-Mole and the rest while playing Stop-The-Light. How many tickets did Victor win playing Stop-The-Light?

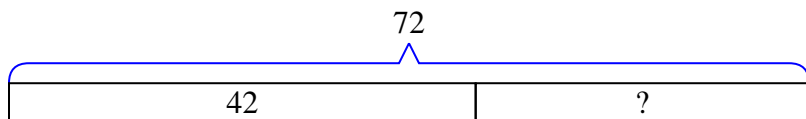


Solve each problem using a tape diagram.

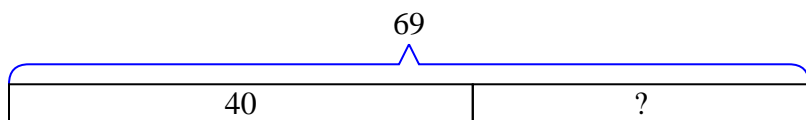
- 1) A waiter has 62 customers. If 24 left, how many customers would the waiter still have?



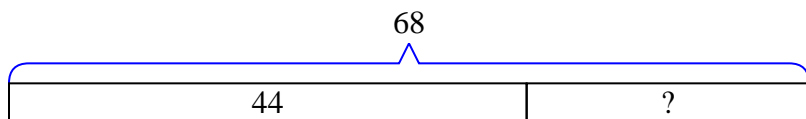
- 2) There were 72 people on the train. At the first stop 42 people got off. How many people are left on the train?



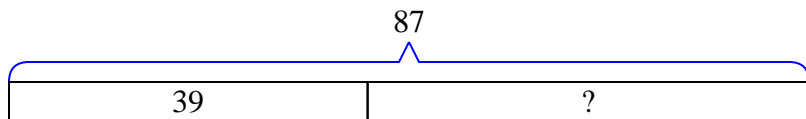
- 3) While playing a game Oliver had 69 lives. He lost 40 lives on a hard level. How many lives does he have left?



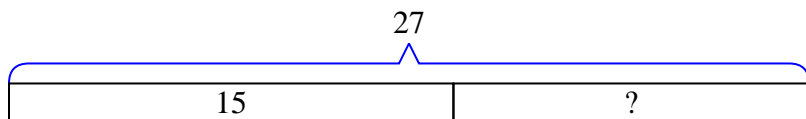
- 4) Paige could send 68 text messages a day. If she sent 44, how many text messages does she have left she can send?



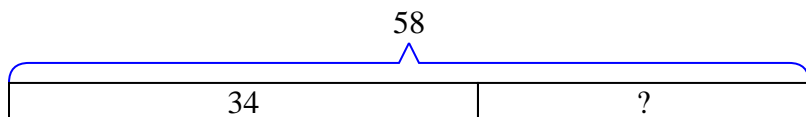
- 5) Gwen had 87 pencils. If she used 39 of them, how many would she have left?



- 6) A baker made 27 cakes. 15 were chocolate and the rest were vanilla. How many cakes were vanilla?



- 7) At the arcade Victor had won 58 tickets total. He won 34 of them while playing Whack-A-Mole and the rest while playing Stop-The-Light. How many tickets did Victor win playing Stop-The-Light?

**Answers**1. **38**2. **30**3. **29**4. **24**5. **48**6. **12**7. **24**