



Solve each problem using a tape diagram.

Answers

1) On week 1 a football player jogged for 46 minutes. On week 2 he jogged for 7 times as long. On week 3 he jogged for 9 times as long as he jogged on week 2. How many minute did he jog across all 3 weeks?

1. _____

2. _____

3. _____

4. _____

2) In one day a restaurant used 11 knives. They also used 2 as many forks as they used knives. And 2 times as many spoons as forks. How many utensils do they use in a day?

5. _____

3) Chef Cody buys 35 carrots. He buys 2 times as many potatoes as carrots and 3 times as many tomatoes as potatoes. How many vegetables did he buy all together?

4) An ice cream shop sold 18 waffle cones. They sold 4 times as many sugar cones as waffle cones and 2 times as many wafer cones as sugar cones. How many cones did they sell total?

5) A school principal was looking over grades. In math 12 students scored a C. 3 times as many students scored a B. And 3 times as many students scored an A as scored a B. How many students scored an A, B or C?

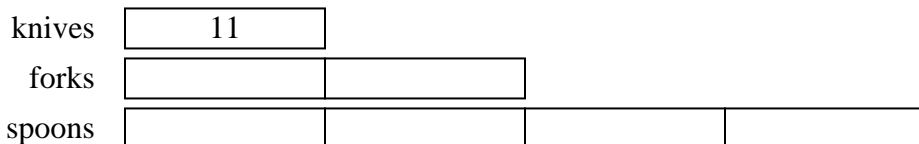


Solve each problem using a tape diagram.

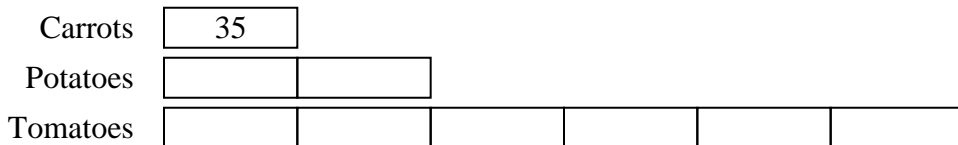
- 1) On week 1 a football player jogged for 46 minutes. On week 2 he jogged for 7 times as long. On week 3 he jogged for 9 times as long as he jogged on week 2. How many minutes did he jog across all 3 weeks?



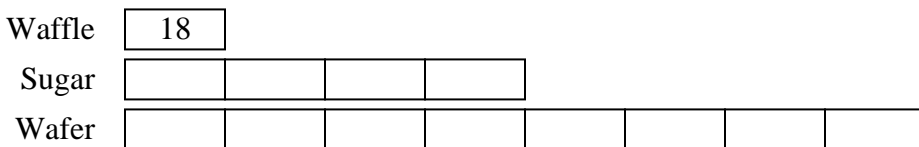
- 2) In one day a restaurant used 11 knives. They also used 2 as many forks as they used knives. And 2 times as many spoons as forks. How many utensils do they use in a day?




- 3) Chef Cody buys 35 carrots. He buys 2 times as many potatoes as carrots and 3 times as many tomatoes as potatoes. How many vegetables did he buy all together?



- 4) An ice cream shop sold 18 waffle cones. They sold 4 times as many sugar cones as waffle cones and 2 times as many wafer cones as sugar cones. How many cones did they sell total?



- 5) A school principal was looking over grades. In math 12 students scored a C. 3 times as many students scored a B. And 3 times as many students scored an A as scored a B. How many students scored an A, B or C?



Answers

1. **3266**

2. **77**

3. **315**

4. **234**

5. **156**