



Solve each problem using a tape diagram.

Answers

Ex) Janet was looking at her Nintendo collection. She had 168 wiiU games. She had $\frac{7}{8}$ as many DS games and $\frac{5}{7}$ as many 3ds games as DS games. How many 3ds games does she have?

Ex. 105

1) A chef was ordering vegetables for his restaurant. He order \$261 worth of potatoes. He also spent $\frac{8}{9}$ as much on tomatoes. Finally he spent $\frac{4}{8}$ as much on green beans as he did on tomatoes. How much did he spend on green beans?

1. _____

2. _____

3. _____

4. _____

2) Lana was trying to determine the weight of a small rock. She determined the small rock was $\frac{2}{3}$ as heavy as a medium rock. The medium rock was $\frac{3}{5}$ as heavy as a large rock. The large rock weighed 330 grams. How heavy was the small rock?

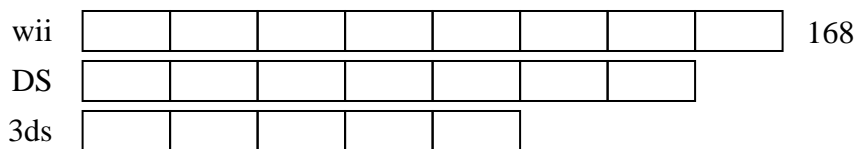
3) At the school fundraiser Adam earned \$432. Bianca earned $\frac{6}{8}$ as much as Adam. And Cathy earned $\frac{4}{6}$ as much as Bianca. How much did Cathy earn?

4) Two years ago the fair had $\frac{1}{4}$ as many people as 1 year ago. 1 year ago the fair had $\frac{4}{5}$ as many people as this year. This year the fair had 215 people. How many people did the fair have 2 years ago?

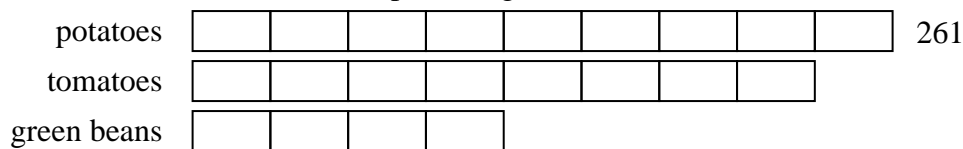


Solve each problem using a tape diagram.

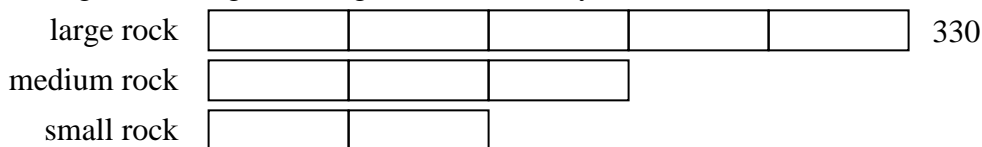
Ex) Janet was looking at her Nintendo collection. She had 168 wiiU games. She had $\frac{7}{8}$ as many DS games and $\frac{5}{7}$ as many 3ds games as DS games. How many 3ds games does she have?



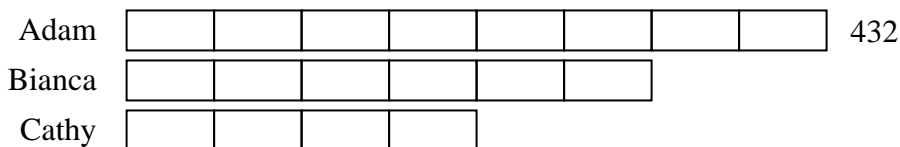
1) A chef was ordering vegetables for his restaurant. He order \$261 worth of potatoes. He also spent $\frac{8}{9}$ as much on tomatoes. Finally he spent $\frac{4}{8}$ as much on green beans as he did on tomatoes. How much did he spend on green beans?



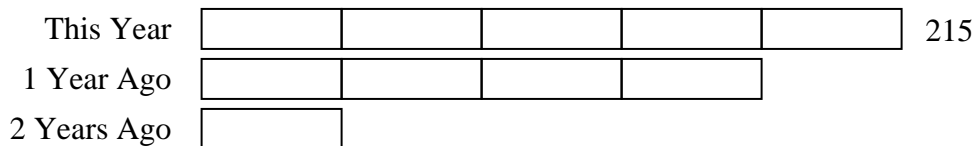
2) Lana was trying to determine the weight of a small rock. She determined the small rock was $\frac{2}{3}$ as heavy as a medium rock. The medium rock was $\frac{3}{5}$ as heavy as a large rock. The large rock weighed 330 grams. How heavy was the small rock?



3) At the school fundraiser Adam earned \$432. Bianca earned $\frac{6}{8}$ as much as Adam. And Cathy earned $\frac{4}{6}$ as much as Bianca. How much did Cathy earn?



4) Two years ago the fair had $\frac{1}{4}$ as many people as 1 year ago. 1 year ago the fair had $\frac{4}{5}$ as many people as this year. This year the fair had 215 people. How many people did the fair have 2 years ago?



Answers

Ex. 105

1. 116

2. 132

3. 216

4. 43