



Solve each problem.

Answers

- 1) An aquarium had 26 fish in it. Later they added 49 fish. How many fish are in the aquarium now?

- 2) Lana had 28 pieces of candy. Her friend gave her 26 more pieces. How many pieces of candy did Lana have total?

- 3) Vanessa had 11 sheets of paper in her desk and 43 more in her backpack. How many did she have total?

- 4) A baker already had 21 cakes but made 27 extra. How many cakes did the baker have total?

- 5) Isabel picked up 32 pieces of paper from the floor. If Sam picked up 42 pieces, how many did they pick up total?

- 6) Kristine had \$36 and Tiffany had \$16. If they combined their money, how much would they have?

- 7) A pet store had 42 kittens. If they got another 15 kittens, how many would they have total?

1. _____

2. _____

3. _____

4. _____

5. _____

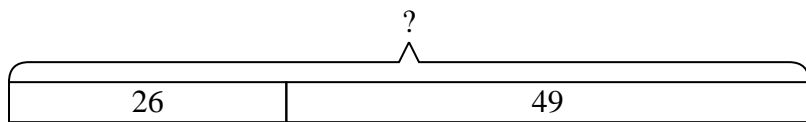
6. _____

7. _____

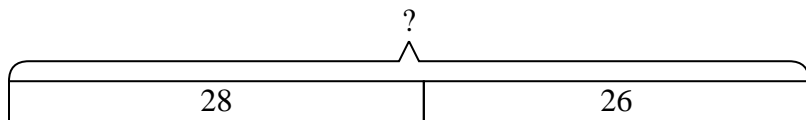


Solve each problem.

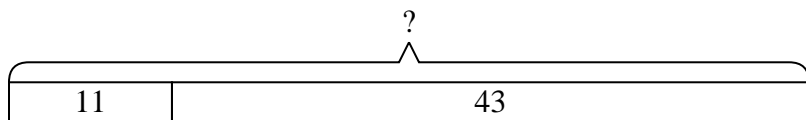
- 1) An aquarium had 26 fish in it. Later they added 49 fish. How many fish are in the aquarium now?



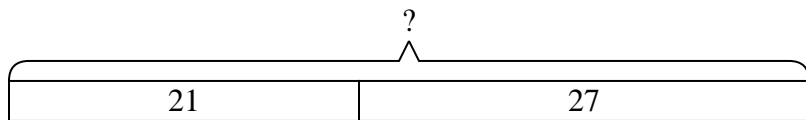
- 2) Lana had 28 pieces of candy. Her friend gave her 26 more pieces. How many pieces of candy did Lana have total?



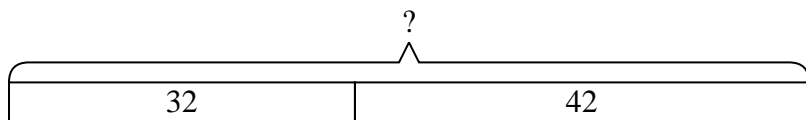
- 3) Vanessa had 11 sheets of paper in her desk and 43 more in her backpack. How many did she have total?



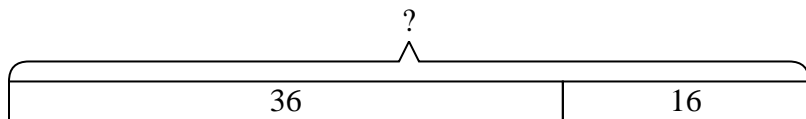
- 4) A baker already had 21 cakes but made 27 extra. How many cakes did the baker have total?



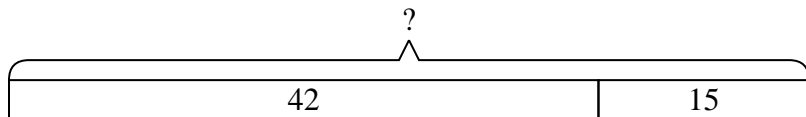
- 5) Isabel picked up 32 pieces of paper from the floor. If Sam picked up 42 pieces, how many did they pick up total?



- 6) Kristine had \$36 and Tiffany had \$16. If they combined their money, how much would they have?



- 7) A pet store had 42 kittens. If they got another 15 kittens, how many would they have total?



Answers

1. 75

2. 54

3. 54

4. 48

5. 74

6. 52

7. 57