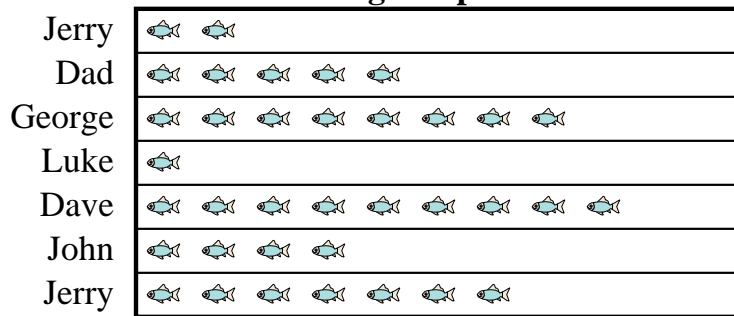





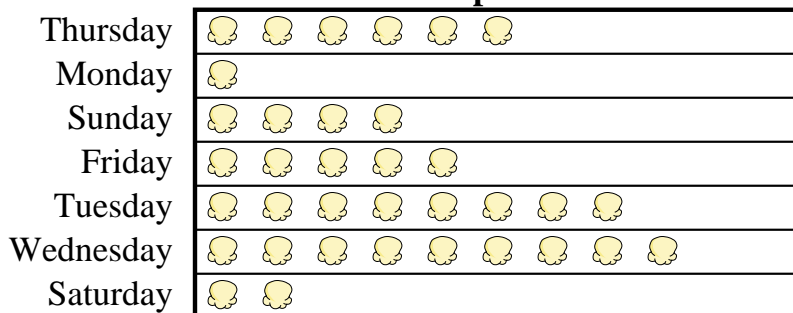
Dave's father took Dave and 5 friends on a fishing trip. They recorded the number of fish they caught using the pictograph below.

Fishing Trip Results

 = 4 Fish Caught

- 1) How many fish did George catch?
- 2) Who caught the most fish?
- 3) Who caught the fewest fish?
- 4) Who caught more fish, Jerry or Dad?
- 5) Who caught exactly 4 fish?

A movie theater was tracking the number of small popcorns they sold each day. They organized the information in the pictograph below.

Small Popcorns Sold

 = 4 Bags Sold

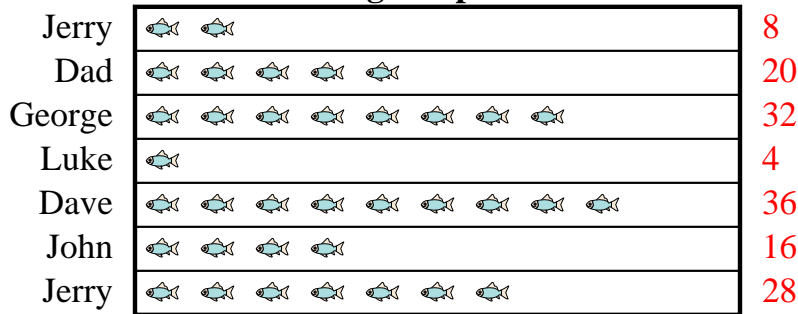
- 6) Which day did they sell exactly 20 bags?
- 7) How many bags did they sell on Sunday?
- 8) Which day did they sell the most popcorn?
- 9) Which day did they sell more popcorn, Thursday or Monday?
- 10) Which day did they sell the least amount of popcorn?

Answers

1. _____
2. _____
3. _____
4. _____
5. _____
6. _____
7. _____
8. _____
9. _____
10. _____

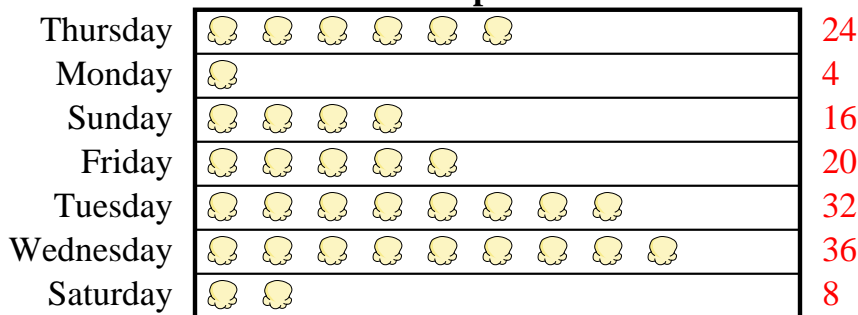


Dave's father took Dave and 5 friends on a fishing trip. They recorded the number of fish they caught using the pictograph below.

Fishing Trip Results = 4 Fish Caught

- How many fish did George catch?
- Who caught the most fish?
- Who caught the fewest fish?
- Who caught more fish, Jerry or Dad?
- Who caught exactly 4 fish?

A movie theater was tracking the number of small popcorns they sold each day. They organized the information in the pictograph below.

Small Popcorns Sold = 4 Bags Sold

- Which day did they sell exactly 20 bags?
- How many bags did they sell on Sunday?
- Which day did they sell the most popcorn?
- Which day did they sell more popcorn, Thursday or Monday?
- Which day did they sell the least amount of popcorn?

Answers

- 32**
- Dave**
- Luke**
- Jerry**
- Luke**
- Friday**
- 16**
- Wednesday**
- Thursday**
- Monday**