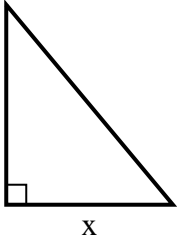


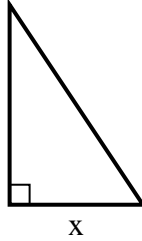


Find the value of X.

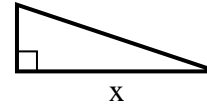
1) area = $15 u^2$



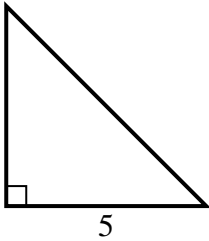
2) area = $3 u^2$



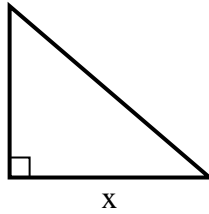
3) area = $6 u^2$



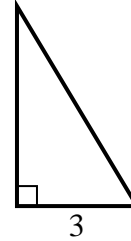
4) area = $12.5 u^2$



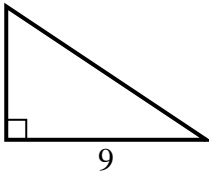
5) area = $21 u^2$



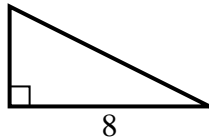
6) area = $7.5 u^2$



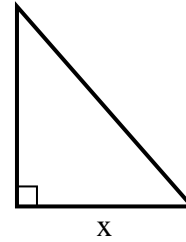
7) area = $27 u^2$



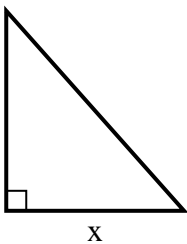
8) area = $16 u^2$



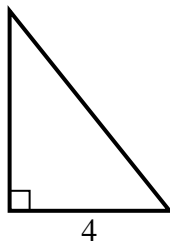
9) area = $28 u^2$



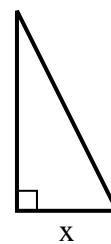
10) area = $36 u^2$



11) area = $10 u^2$



12) area = $4 u^2$



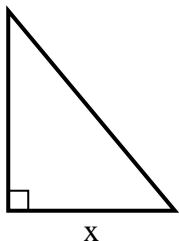
Answers

1. _____
2. _____
3. _____
4. _____
5. _____
6. _____
7. _____
8. _____
9. _____
10. _____
11. _____
12. _____

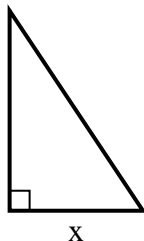


Find the value of X.

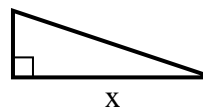
1) area = $15 u^2$



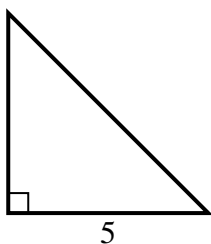
2) area = $3 u^2$



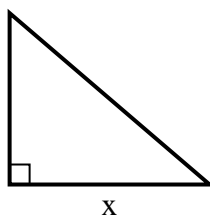
3) area = $6 u^2$



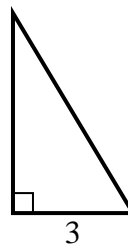
4) area = $12.5 u^2$



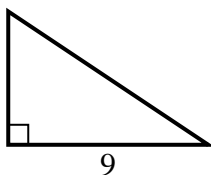
5) area = $21 u^2$



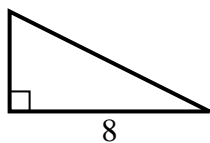
6) area = $7.5 u^2$



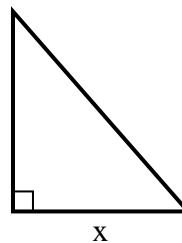
7) area = $27 u^2$



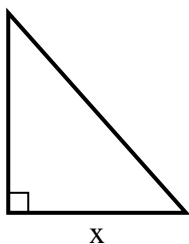
8) area = $16 u^2$



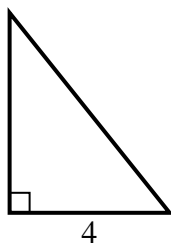
9) area = $28 u^2$



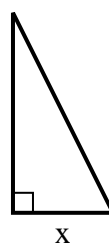
10) area = $36 u^2$



11) area = $10 u^2$



12) area = $4 u^2$



Answers

1. 5

2. 2

3. 6

4. 5

5. 7

6. 5

7. 6

8. 4

9. 7

10. 8

11. 5

12. 2