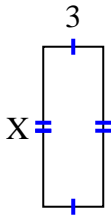


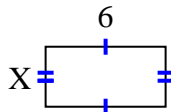


Find the value of X for each figure. Each figure is in centimeters (cm). Not to scale.

1) area =  $24 \text{ cm}^2$



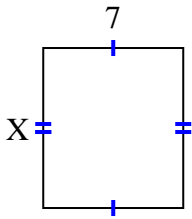
2) area =  $18 \text{ cm}^2$



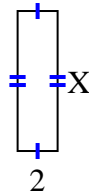
3) area =  $4 \text{ cm}^2$



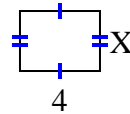
4) area =  $56 \text{ cm}^2$



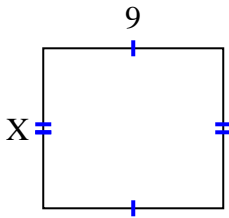
5) area =  $14 \text{ cm}^2$



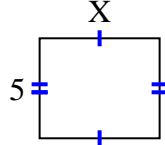
6) area =  $12 \text{ cm}^2$



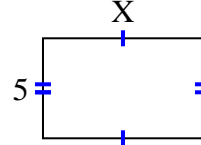
7) area =  $72 \text{ cm}^2$



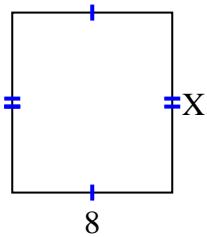
8) area =  $30 \text{ cm}^2$



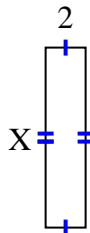
9) area =  $40 \text{ cm}^2$



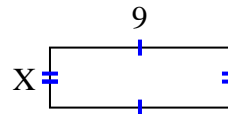
10) area =  $72 \text{ cm}^2$



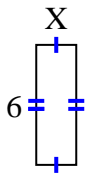
11) area =  $18 \text{ cm}^2$



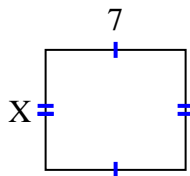
12) area =  $27 \text{ cm}^2$



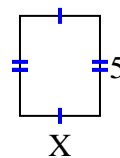
13) area =  $12 \text{ cm}^2$



14) area =  $42 \text{ cm}^2$



15) area =  $20 \text{ cm}^2$



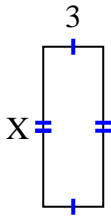
**Answers**

1. \_\_\_\_\_
2. \_\_\_\_\_
3. \_\_\_\_\_
4. \_\_\_\_\_
5. \_\_\_\_\_
6. \_\_\_\_\_
7. \_\_\_\_\_
8. \_\_\_\_\_
9. \_\_\_\_\_
10. \_\_\_\_\_
11. \_\_\_\_\_
12. \_\_\_\_\_
13. \_\_\_\_\_
14. \_\_\_\_\_
15. \_\_\_\_\_

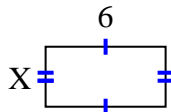


Find the value of X for each figure. Each figure is in centimeters (cm). Not to scale.

1) area =  $24 \text{ cm}^2$



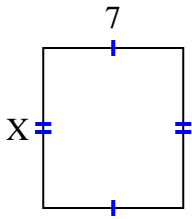
2) area =  $18 \text{ cm}^2$



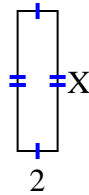
3) area =  $4 \text{ cm}^2$



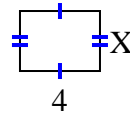
4) area =  $56 \text{ cm}^2$



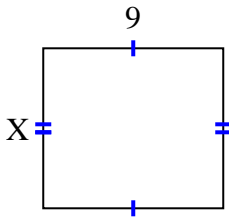
5) area =  $14 \text{ cm}^2$



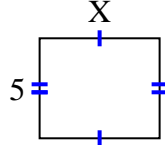
6) area =  $12 \text{ cm}^2$



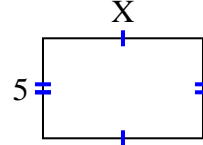
7) area =  $72 \text{ cm}^2$



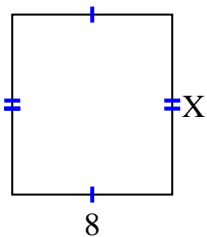
8) area =  $30 \text{ cm}^2$



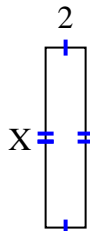
9) area =  $40 \text{ cm}^2$



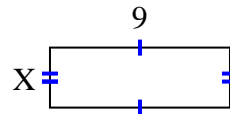
10) area =  $72 \text{ cm}^2$



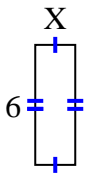
11) area =  $18 \text{ cm}^2$



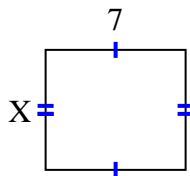
12) area =  $27 \text{ cm}^2$



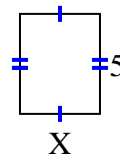
13) area =  $12 \text{ cm}^2$



14) area =  $42 \text{ cm}^2$



15) area =  $20 \text{ cm}^2$



Answers

1. 8

2. 3

3. 2

4. 8

5. 7

6. 3

7. 8

8. 6

9. 8

10. 9

11. 9

12. 3

13. 2

14. 6

15. 4