




Determine which letter best represents the weight.

**Ounce (oz)**

An ounce is about the weight of a slice of bread.



**Pound (lb)**

A pound is about the weight of a can of vegetables.



**Remember:**

There are 16 ounces in 1 pound.

**Answers**

1. \_\_\_\_\_
2. \_\_\_\_\_
3. \_\_\_\_\_
4. \_\_\_\_\_
5. \_\_\_\_\_
6. \_\_\_\_\_
7. \_\_\_\_\_
8. \_\_\_\_\_
9. \_\_\_\_\_

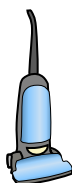
1)



File Cabinet

- A. 2 pounds
- B. 11 ounces
- C. 160 ounces
- D. 120 pounds

2)



Vacuum


- A. 1100 pounds
- B. 35 pounds
- C. 2 ounces
- D. 3 ounces

3)

Screw

- A. 0.04 ounces
- B. 2 pounds
- C. 10 ounces
- D. 1 pound

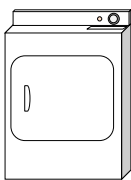
4)



Adult Horse

- A. 14 ounces
- B. 900 pounds
- C. 1 ounce
- D. 100 pounds


5)



Clothes Dryer

- A. 110 pounds
- B. 1 ounce
- C. 160 ounces
- D. 7 pounds

6)



Notebook Paper


- A. 3 ounces
- B. 10 ounces
- C. 2 pounds
- D. 0.1 ounces

7)

Big Screen TV

- A. 2000 pounds
- B. 160 ounces
- C. 1.25 ounces
- D. 40 pounds

8)



Lawn Mower

- A. 100 ounces
- B. 200 ounces
- C. 200 pounds
- D. 50 pounds

9)



Candle

- A. 0.2 ounces
- B. 16 ounces
- C. 1 pound
- D. 20 pounds



Determine which letter best represents the weight.

**Ounce (oz)**

An ounce is about the weight of a slice of bread.



**Pound (lb)**

A pound is about the weight of a can of vegetables.



**Remember:**  
There are 16 ounces in 1 pound.

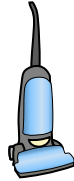
**Answers**

1)



- File Cabinet  
 A. 2 pounds  
 B. 11 ounces  
 C. 160 ounces  
 D. 120 pounds

2)




- Vacuum  
 A. 1100 pounds  
 B. 35 pounds  
 C. 2 ounces  
 D. 3 ounces

3)

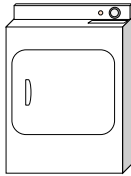
- Screw  
 A. 0.04 ounces  
 B. 2 pounds  
 C. 10 ounces  
 D. 1 pound

4)




- Adult Horse  
 A. 14 ounces  
 B. 900 pounds  
 C. 1 ounce  
 D. 100 pounds

5)



- Clothes Dryer  
 A. 110 pounds  
 B. 1 ounce  
 C. 160 ounces  
 D. 7 pounds

6)




- Notebook Paper  
 A. 3 ounces  
 B. 10 ounces  
 C. 2 pounds  
 D. 0.1 ounces

7)

- Big Screen TV  
 A. 2000 pounds  
 B. 160 ounces  
 C. 1.25 ounces  
 D. 40 pounds

8)



- Lawn Mower  
 A. 100 ounces  
 B. 200 ounces  
 C. 200 pounds  
 D. 50 pounds

9)



- Candle  
 A. 0.2 ounces  
 B. 16 ounces  
 C. 1 pound  
 D. 20 pounds

1.   **D**
2.   **B**
3.   **A**
4.   **B**
5.   **A**
6.   **D**
7.   **D**
8.   **D**
9.   **A**