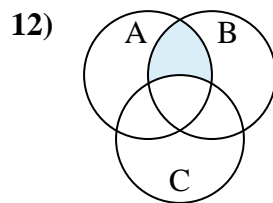
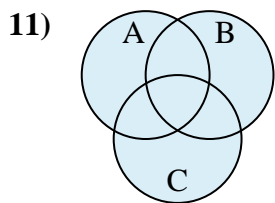
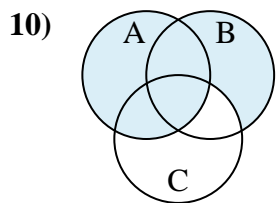
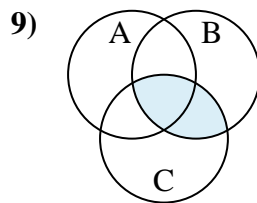
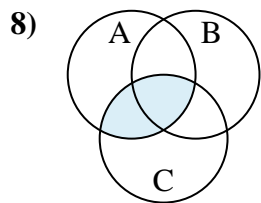
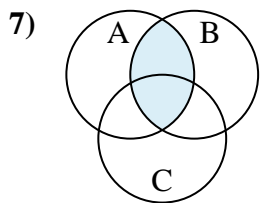
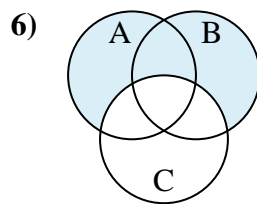
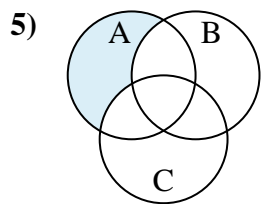
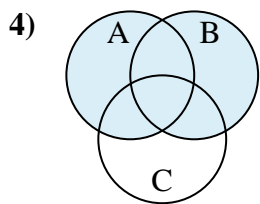
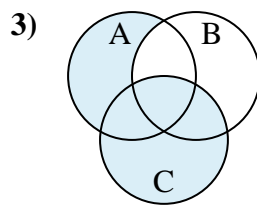
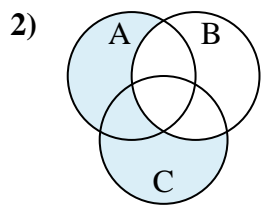
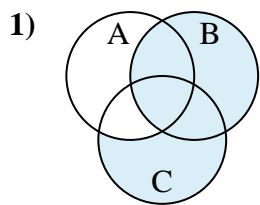




Determine the shaded region of each diagram.

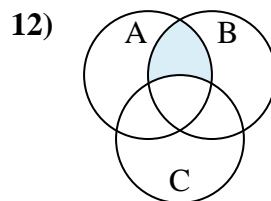
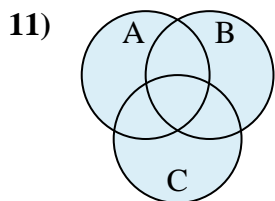
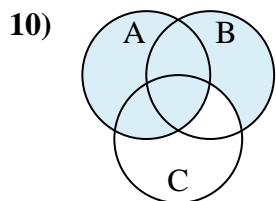
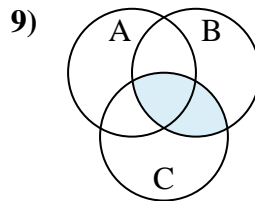
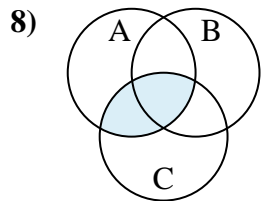
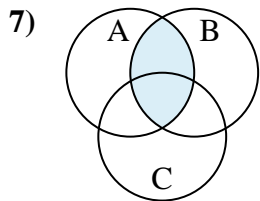
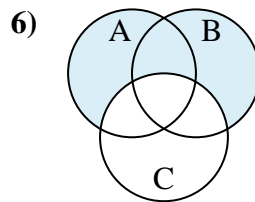
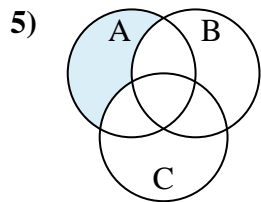
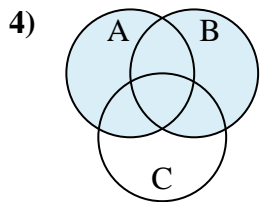
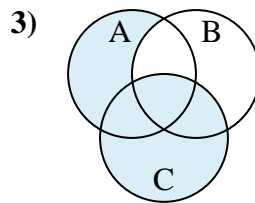
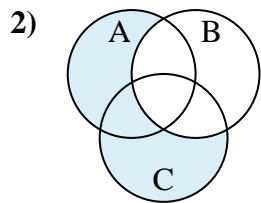
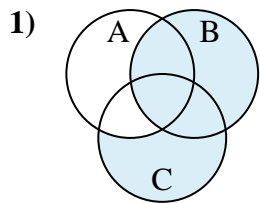


**Answers**

1. \_\_\_\_\_
2. \_\_\_\_\_
3. \_\_\_\_\_
4. \_\_\_\_\_
5. \_\_\_\_\_
6. \_\_\_\_\_
7. \_\_\_\_\_
8. \_\_\_\_\_
9. \_\_\_\_\_
10. \_\_\_\_\_
11. \_\_\_\_\_
12. \_\_\_\_\_



Determine the shaded region of each diagram.



Answers

1.  $B \cup (C - A)$

2.  $(C \cup A) - B$

3.  $C \cup (A - B)$

4.  $A \cup B$

5.  $A - (B \cup C)$

6.  $(A \cup B) - C$

7.  $A \cap B$

8.  $C \cap A$

9.  $C \cap B$

10.  $A \cup (B - C)$

11.  $A \cup C \cup B$

12.  $(B \cap A) - C$