



Solve each problem.

1) $2 + 2 = \underline{\quad}$

2) $3 + 2 = \underline{\quad}$

3) $5 + 0 = \underline{\quad}$

4) $4 + 1 = \underline{\quad}$

5) $1 + 3 = \underline{\quad}$

6) $2 + 3 = \underline{\quad}$

7) $2 + 1 = \underline{\quad}$

8) $3 + 1 = \underline{\quad}$

9) $4 - 3 = \underline{\quad}$

10) $5 - 5 = \underline{\quad}$

11) $4 - 4 = \underline{\quad}$

12) $3 - 3 = \underline{\quad}$

13) $5 - 4 = \underline{\quad}$

14) $5 - 2 = \underline{\quad}$

15) $4 - 2 = \underline{\quad}$

16) $3 - 2 = \underline{\quad}$

Answers

1. _____

2. _____

3. _____

4. _____

5. _____

6. _____

7. _____

8. _____

9. _____

10. _____

11. _____

12. _____

13. _____

14. _____

15. _____

16. _____



Solve each problem.

1) $2 + 2 = \underline{4}$

2) $3 + 2 = \underline{5}$

3) $5 + 0 = \underline{5}$

4) $4 + 1 = \underline{5}$

5) $1 + 3 = \underline{4}$

6) $2 + 3 = \underline{5}$

7) $2 + 1 = \underline{3}$

8) $3 + 1 = \underline{4}$

9) $4 - 3 = \underline{1}$

10) $5 - 5 = \underline{0}$

11) $4 - 4 = \underline{0}$

12) $3 - 3 = \underline{0}$

13) $5 - 4 = \underline{1}$

14) $5 - 2 = \underline{3}$

15) $4 - 2 = \underline{2}$



16) $3 - 2 = \underline{1}$



Answers1. 42. 53. 54. 55. 46. 57. 38. 49. 110. 011. 012. 013. 114. 315. 216. 1






Solve each problem.



Answers



1) $2 + 2 = \underline{\quad}$
 $+$ 



2) $3 + 2 = \underline{\quad}$
 $+$ 



3) $5 + 0 = \underline{\quad}$




4) $4 + 1 = \underline{\quad}$
 $+$ 

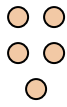
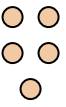
5) $1 + 3 = \underline{\quad}$
 $+$ 



6) $2 + 3 = \underline{\quad}$
 $+$ 



7) $2 + 1 = \underline{\quad}$
 $+$ 



8) $3 + 1 = \underline{\quad}$
 $+$ 



9) $4 - 3 = \underline{\quad}$
 $-$ 



10) $5 - 5 = \underline{\quad}$
 $-$ 



11) $4 - 4 = \underline{\quad}$
 $-$ 

12) $3 - 3 = \underline{\quad}$
 $-$ 

13) $5 - 4 = \underline{\quad}$
 $-$ 

14) $5 - 2 = \underline{\quad}$
 $-$ 

15) $4 - 2 = \underline{\quad}$
 $-$ 

16) $3 - 2 = \underline{\quad}$
 $-$ 

1. _____
2. _____
3. _____
4. _____
5. _____
6. _____
7. _____
8. _____
9. _____
10. _____
11. _____
12. _____
13. _____
14. _____
15. _____
16. _____